

Nombre: _____

Fecha: _____

Calcular mentalmente

$$\boxed{4} \xrightarrow{+7} \boxed{} \xrightarrow{+0} \boxed{} \xrightarrow{-4} \boxed{} \xrightarrow{+5} \boxed{} \xrightarrow{-8} \boxed{} \xrightarrow{+8} \boxed{} \xrightarrow{+6} \boxed{} \xrightarrow{-3} \boxed{}$$

$$\boxed{5} \xrightarrow{+5} \boxed{} \xrightarrow{+8} \boxed{} \xrightarrow{-7} \boxed{} \xrightarrow{+2} \boxed{} \xrightarrow{-7} \boxed{} \xrightarrow{+8} \boxed{} \xrightarrow{+8} \boxed{} \xrightarrow{-8} \boxed{}$$

Continuar las series:

$$42 \Rightarrow 46 \Rightarrow 50 \Rightarrow \quad \Rightarrow \quad \Rightarrow \quad \Rightarrow \quad \Rightarrow \quad \Rightarrow$$

$$88 \Rightarrow 84 \Rightarrow 80 \Rightarrow \quad \Rightarrow \quad \Rightarrow \quad \Rightarrow \quad \Rightarrow \quad \Rightarrow$$

Completar:

8	1	1	4	→	⊙14
3	3	2	3	→	⊙
2	3	3	4	→	⊙
3	2	0	0	→	⊙

↓ ↓ ↓ ↓

⊙ ⊙ ⊙ ⊙

3	0	1	□
3	□	4	
□	□		
□			

$$- \begin{array}{r} 4 \ 1 \\ \dots \ \dots \\ \hline 4 \ 0 \end{array} \quad + \begin{array}{r} 7 \ 7 \\ \dots \ \dots \\ \hline 8 \ 7 \end{array}$$

Completar:

$$3 + 3 + \underline{\quad} = 14 \qquad 0 + 0 + \underline{\quad} = 3$$

$$10 + 40 = \boxed{} \qquad 10 - 0 = \boxed{} \qquad 30 + \underline{\quad} = 90$$

$$17 - 2 = \boxed{} \qquad 61 + \underline{\quad} = 68 \qquad 79 + \underline{\quad} = 86$$

Sumar y restar:

$$\boxed{7} + \dots \boxed{10} + \dots \boxed{13} - \dots \boxed{11} + \dots \boxed{12} - \dots \boxed{9} + \dots \boxed{10} - \dots \boxed{7} + \dots \boxed{8}$$

Colocar y sumar:

65 + 15 + 2

2 + 30 + 12

www.fichas.net

11 + 3 + 66

Nombre: _____

Fecha: _____

Calcular mentalmente

$$\boxed{3} \xrightarrow{+0} \boxed{} \xrightarrow{+2} \boxed{} \xrightarrow{-2} \boxed{} \xrightarrow{+6} \boxed{} \xrightarrow{-2} \boxed{} \xrightarrow{+6} \boxed{} \xrightarrow{+1} \boxed{} \xrightarrow{-8} \boxed{}$$

$$\boxed{3} \xrightarrow{+6} \boxed{} \xrightarrow{+5} \boxed{} \xrightarrow{-8} \boxed{} \xrightarrow{+5} \boxed{} \xrightarrow{-6} \boxed{} \xrightarrow{+5} \boxed{} \xrightarrow{+8} \boxed{} \xrightarrow{-9} \boxed{}$$

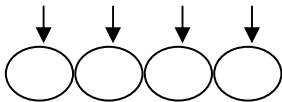
Continuar las series:

$$40 \Rightarrow 43 \Rightarrow 46 \Rightarrow \quad \Rightarrow \quad \Rightarrow \quad \Rightarrow \quad \Rightarrow \quad \Rightarrow$$

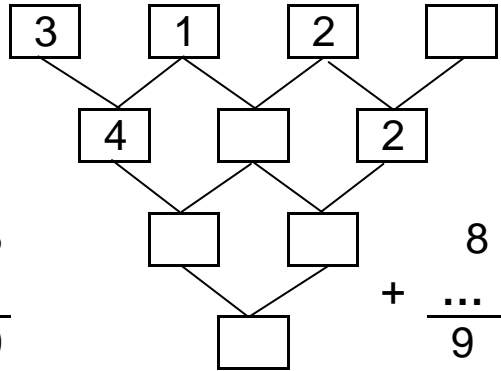
$$60 \Rightarrow 57 \Rightarrow 54 \Rightarrow \quad \Rightarrow \quad \Rightarrow \quad \Rightarrow \quad \Rightarrow \quad \Rightarrow$$

Completar:

4	4	0	3	→	⓪
1	3	2	4	→	⓪
3	6	2	1	→	⓪
4	3	2	3	→	⓪



$$\begin{array}{r} 5 \quad 5 \\ - \dots \dots \\ \hline 5 \quad 0 \end{array}$$



$$\begin{array}{r} 8 \quad 8 \\ + \dots \dots \\ \hline 9 \quad 3 \end{array}$$

Completar:

$$4 + 4 + \underline{\quad} = 15$$

$$3 + 3 + \underline{\quad} = 7$$

$$90 + 0 = \boxed{}$$

$$70 - 60 = \boxed{}$$

$$70 + \underline{\quad} = 70$$

$$16 - 8 = \boxed{}$$

$$67 + \underline{\quad} = 73$$

$$67 + \underline{\quad} = 75$$

Sumar y restar:

$$\boxed{6} + \dots \boxed{11} + \dots \boxed{11} - \dots \boxed{7} + \dots \boxed{10} - \dots \boxed{8} + \dots \boxed{12} - \dots \boxed{9} + \dots \boxed{11}$$

Colocar y sumar:

26 + 14 + 8

2 + 63 + 11

www.fichas.net

16 + 2 + 53

Nombre: _____

Fecha: _____

Calcular mentalmente

$7 \xrightarrow{+8} \square \xrightarrow{+4} \square \xrightarrow{-8} \square \xrightarrow{+2} \square \xrightarrow{-3} \square \xrightarrow{+4} \square \xrightarrow{+5} \square \xrightarrow{-2} \square$

$5 \xrightarrow{+8} \square \xrightarrow{+1} \square \xrightarrow{-3} \square \xrightarrow{+3} \square \xrightarrow{-8} \square \xrightarrow{+4} \square \xrightarrow{+4} \square \xrightarrow{-1} \square$

Continuar las series:

$17 \Rightarrow 19 \Rightarrow 21 \Rightarrow \square \Rightarrow \square \Rightarrow \square \Rightarrow \square \Rightarrow \square$

$70 \Rightarrow 66 \Rightarrow 62 \Rightarrow \square \Rightarrow \square \Rightarrow \square \Rightarrow \square \Rightarrow \square$

Completar:

7	5	1	3	→	ⓧ16
3	4	2	5	→	○
0	7	0	9	→	○
2	1	5	2	→	○

↓ ↓ ↓ ↓

○ ○ ○ ○

0	1	1	□
1	□	3	
□	□		
□			

$8 \ 2$
 $- \dots \ \dots$
 $8 \ 0$

$2 \ 7$
 $+ \dots \ \dots$
 $3 \ 3$

Completar:

$2 + 2 + \underline{\quad} = 12$

$6 + 6 + \underline{\quad} = 20$

$90 + 0 = \square$

$50 - 20 = \square$

$0 + \underline{\quad} = 60$

$13 - 7 = \square$

$58 + \underline{\quad} = 67$

$58 + \underline{\quad} = 66$

Sumar y restar:

$1 + \dots + 2 + \dots + 6 - \dots - 5 + \dots + 6 - \dots - 2 + \dots + 5 - \dots - 2 + \dots + 5$

Colocar y sumar:

41 + 11 + 5

4 + 22 + 12

www.fichas.net

19 + 2 + 41

Nombre: _____

Fecha: _____

Calcular mentalmente

$$\boxed{7} \xrightarrow{+6} \boxed{} \xrightarrow{+6} \boxed{} \xrightarrow{-4} \boxed{} \xrightarrow{+7} \boxed{} \xrightarrow{-2} \boxed{} \xrightarrow{+7} \boxed{} \xrightarrow{+4} \boxed{} \xrightarrow{-8} \boxed{}$$

$$\boxed{4} \xrightarrow{+9} \boxed{} \xrightarrow{+0} \boxed{} \xrightarrow{-6} \boxed{} \xrightarrow{+3} \boxed{} \xrightarrow{-5} \boxed{} \xrightarrow{+1} \boxed{} \xrightarrow{+6} \boxed{} \xrightarrow{-8} \boxed{}$$

Continuar las series:

$$7 \Rightarrow 10 \Rightarrow 13 \Rightarrow \quad \Rightarrow \quad \Rightarrow \quad \Rightarrow \quad \Rightarrow \quad \Rightarrow$$

$$83 \Rightarrow 82 \Rightarrow 81 \Rightarrow \quad \Rightarrow \quad \Rightarrow \quad \Rightarrow \quad \Rightarrow \quad \Rightarrow$$

Completar:

5	2	1	4	→	⓫
2	4	2	2	→	○
3	5	5	0	→	○
3	1	5	5	→	○

↓ ↓ ↓ ↓

○ ○ ○ ○

1	3	1	□
4	□	1	
□	□		
□			

$$- \begin{array}{r} 4 \ 5 \\ \dots \ \dots \\ 4 \ 0 \end{array} \quad + \begin{array}{r} 4 \ 1 \\ \dots \ \dots \\ 5 \ 4 \end{array}$$

Completar:

$$6 + 6 + \underline{\quad} = 18 \qquad 7 + 7 + \underline{\quad} = 16$$

$$60 + 0 = \boxed{} \qquad 90 - 50 = \boxed{} \qquad 10 + \underline{\quad} = 50$$

$$16 - 6 = \boxed{} \qquad 75 + \underline{\quad} = 84 \qquad 65 + \underline{\quad} = 72$$

Sumar y restar:

$$\boxed{3} + \dots \boxed{6} + \dots \boxed{6} - \dots \boxed{1} + \dots \boxed{2} - \dots \boxed{0} + \dots \boxed{0} - \dots \boxed{0} + \dots \boxed{1}$$

Colocar y sumar:

39 + 11 + 1

1 + 59 + 13

www.fichas.net

18 + 1 + 38

Nombre: _____

Fecha: _____

Calcular mentalmente

$$\boxed{2} \xrightarrow{+5} \boxed{} \xrightarrow{+0} \boxed{} \xrightarrow{-4} \boxed{} \xrightarrow{+8} \boxed{} \xrightarrow{-3} \boxed{} \xrightarrow{+9} \boxed{} \xrightarrow{+2} \boxed{} \xrightarrow{-8} \boxed{}$$

$$\boxed{8} \xrightarrow{+3} \boxed{} \xrightarrow{+4} \boxed{} \xrightarrow{-1} \boxed{} \xrightarrow{+9} \boxed{} \xrightarrow{-5} \boxed{} \xrightarrow{+7} \boxed{} \xrightarrow{+1} \boxed{} \xrightarrow{-6} \boxed{}$$

Continuar las series:

$$56 \Rightarrow 58 \Rightarrow 60 \Rightarrow \quad \Rightarrow \quad \Rightarrow \quad \Rightarrow \quad \Rightarrow \quad \Rightarrow$$

$$62 \Rightarrow 59 \Rightarrow 56 \Rightarrow \quad \Rightarrow \quad \Rightarrow \quad \Rightarrow \quad \Rightarrow \quad \Rightarrow$$

Completar:

7	2	3	3	→	ⓧ15
1	1	2	4	→	○
1	4	3	5	→	○
3	1	1	9	→	○

↓ ↓ ↓ ↓

○ ○ ○ ○

2	1	3	□
3	□	5	
□	□		
□			

$$- \begin{array}{r} 7 \ 5 \\ \dots \ \dots \\ 7 \ 0 \end{array} + \begin{array}{r} 2 \ 7 \\ \dots \ \dots \\ 3 \ 2 \end{array}$$

Completar:

$$4 + 4 + \underline{\quad} = 11 \qquad 3 + 3 + \underline{\quad} = 13$$

$$90 + 0 = \boxed{} \qquad 50 - 30 = \boxed{} \qquad 30 + \underline{\quad} = 40$$

$$19 - 4 = \boxed{} \qquad 56 + \underline{\quad} = 63 \qquad 71 + \underline{\quad} = 80$$

Sumar y restar:

$$\boxed{7} + \dots \boxed{11} + \dots \boxed{15} - \dots \boxed{11} + \dots \boxed{14} - \dots \boxed{12} + \dots \boxed{16} - \dots \boxed{15} + \dots \boxed{15}$$

Colocar y sumar:

56 + 15 + 0

3 + 73 + 12

www.fichas.net

18 + 2 + 23

Nombre: _____

Fecha: _____

Calcular mentalmente

$\boxed{3} \xrightarrow{+1} \boxed{} \xrightarrow{+3} \boxed{} \xrightarrow{-1} \boxed{} \xrightarrow{+3} \boxed{} \xrightarrow{-3} \boxed{} \xrightarrow{+5} \boxed{} \xrightarrow{+3} \boxed{} \xrightarrow{-5} \boxed{}$

$\boxed{7} \xrightarrow{+0} \boxed{} \xrightarrow{+5} \boxed{} \xrightarrow{-2} \boxed{} \xrightarrow{+1} \boxed{} \xrightarrow{-0} \boxed{} \xrightarrow{+4} \boxed{} \xrightarrow{+2} \boxed{} \xrightarrow{-3} \boxed{}$

Continuar las series:

$57 \Rightarrow 60 \Rightarrow 63 \Rightarrow \Rightarrow \Rightarrow \Rightarrow \Rightarrow $

$97 \Rightarrow 93 \Rightarrow 89 \Rightarrow \Rightarrow \Rightarrow \Rightarrow \Rightarrow $

Completar:

7	5	1	4	→	$\textcircled{17}$
1	5	1	1	→	\bigcirc
5	9	3	6	→	\bigcirc
2	2	3	5	→	\bigcirc

↓ ↓ ↓ ↓

$\bigcirc \quad \bigcirc \quad \bigcirc \quad \bigcirc$

4	3	1	$$
7		$$	4
$$	$$	$$	$$
$$			

$$- \begin{array}{r} 3 \ 2 \\ \dots \ \dots \\ \hline 3 \ 0 \end{array} + \begin{array}{r} 5 \ 1 \\ \dots \ \dots \\ \hline 6 \ 7 \end{array}$$

Completar:

$0 + 0 + \underline{} = 2$ $7 + 7 + \underline{} = 16$

$70 + 10 = \boxed{}$ $30 - 30 = \boxed{}$ $50 + \underline{} = 70$

$12 - 4 = \boxed{}$ $81 + \underline{} = 86$ $81 + \underline{} = 88$

Sumar y restar:

$\boxed{0} + \dots \boxed{3} + \dots \boxed{7} - \dots \boxed{3} + \dots \boxed{5} - \dots \boxed{0} + \dots \boxed{2} - \dots \boxed{1} + \dots \boxed{3}$

Colocar y sumar:

70 + 14 + 2

5 + 36 + 11

www.fichas.net

15 + 2 + 63

Nombre: _____

Fecha: _____

Calcular mentalmente

$$\boxed{2} \xrightarrow{+6} \boxed{} \xrightarrow{+1} \boxed{} \xrightarrow{-4} \boxed{} \xrightarrow{+7} \boxed{} \xrightarrow{-5} \boxed{} \xrightarrow{+7} \boxed{} \xrightarrow{+9} \boxed{} \xrightarrow{-2} \boxed{}$$

$$\boxed{0} \xrightarrow{+3} \boxed{} \xrightarrow{+7} \boxed{} \xrightarrow{-5} \boxed{} \xrightarrow{+2} \boxed{} \xrightarrow{-4} \boxed{} \xrightarrow{+0} \boxed{} \xrightarrow{+1} \boxed{} \xrightarrow{-0} \boxed{}$$

Continuar las series:

$$52 \Rightarrow 53 \Rightarrow 54 \Rightarrow \quad \Rightarrow \quad \Rightarrow \quad \Rightarrow \quad \Rightarrow \quad \Rightarrow$$

$$92 \Rightarrow 91 \Rightarrow 90 \Rightarrow \quad \Rightarrow \quad \Rightarrow \quad \Rightarrow \quad \Rightarrow \quad \Rightarrow$$

Completar:

1	3	1	2	→	○7
1	3	1	2	→	○
3	3	2	5	→	○
1	2	2	1	→	○

↓ ↓ ↓ ↓

○ ○ ○ ○

2	2	4	□
4	□	9	
□	□		
□			

$$- \begin{array}{r} 83 \\ \dots \dots \\ 80 \end{array} + \begin{array}{r} 53 \\ \dots \dots \\ 60 \end{array}$$

Completar:

$$7 + 7 + \underline{\quad} = 17 \qquad 6 + 6 + \underline{\quad} = 21$$

$$0 + 0 = \boxed{} \qquad 90 - 10 = \boxed{} \qquad 50 + \underline{\quad} = 70$$

$$13 - 1 = \boxed{} \qquad 60 + \underline{\quad} = 66 \qquad 70 + \underline{\quad} = 76$$

Sumar y restar:

$$\boxed{8} + \dots \boxed{8} + \dots \boxed{8} - \dots \boxed{6} + \dots \boxed{8} - \dots \boxed{6} + \dots \boxed{10} - \dots \boxed{6} + \dots \boxed{9}$$

Colocar y sumar:

73 + 16 + 4

1 + 49 + 13

www.fichas.net

16 + 2 + 58

Nombre: _____

Fecha: _____

Calcular mentalmente

$$\boxed{8} \xrightarrow{+6} \boxed{} \xrightarrow{+7} \boxed{} \xrightarrow{-2} \boxed{} \xrightarrow{+1} \boxed{} \xrightarrow{-5} \boxed{} \xrightarrow{+2} \boxed{} \xrightarrow{+2} \boxed{} \xrightarrow{-5} \boxed{}$$

$$\boxed{2} \xrightarrow{+1} \boxed{} \xrightarrow{+4} \boxed{} \xrightarrow{-6} \boxed{} \xrightarrow{+8} \boxed{} \xrightarrow{-1} \boxed{} \xrightarrow{+5} \boxed{} \xrightarrow{+5} \boxed{} \xrightarrow{-2} \boxed{}$$

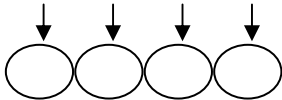
Continuar las series:

$$37 \Rightarrow 40 \Rightarrow 43 \Rightarrow \Rightarrow \Rightarrow \Rightarrow \Rightarrow \Rightarrow \Rightarrow$$

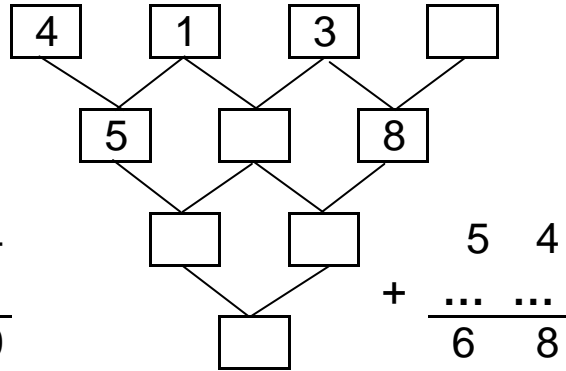
$$84 \Rightarrow 81 \Rightarrow 78 \Rightarrow \Rightarrow \Rightarrow \Rightarrow \Rightarrow \Rightarrow \Rightarrow$$

Completar:

5	0	0	0	→	○
1	1	1	1	→	○
2	6	2	4	→	○
4	0	3	2	→	○



$$\begin{array}{r} 64 \\ - \dots \\ \hline 60 \end{array}$$



Completar:

$$6 + 6 + \underline{\quad} = 21$$

$$3 + 3 + \underline{\quad} = 13$$

$$30 + 40 = \boxed{}$$

$$50 - 20 = \boxed{}$$

$$40 + \underline{\quad} = 50$$

$$15 - 2 = \boxed{}$$

$$89 + \underline{\quad} = 98$$

$$61 + \underline{\quad} = 68$$

Sumar y restar:

$$\boxed{6} + \dots \boxed{8} + \dots \boxed{12} - \dots \boxed{9} + \dots \boxed{14} - \dots \boxed{13} + \dots \boxed{14} - \dots \boxed{10} + \dots \boxed{14}$$

Colocar y sumar:

51 + 13 + 1

2 + 53 + 11

www.fichas.net

14 + 3 + 57

Nombre: _____

Fecha: _____

Calcular mentalmente

$$\boxed{2} \xrightarrow{+8} \boxed{} \xrightarrow{+4} \boxed{} \xrightarrow{-3} \boxed{} \xrightarrow{+2} \boxed{} \xrightarrow{-7} \boxed{} \xrightarrow{+1} \boxed{} \xrightarrow{+8} \boxed{} \xrightarrow{-2} \boxed{}$$

$$\boxed{2} \xrightarrow{+5} \boxed{} \xrightarrow{+9} \boxed{} \xrightarrow{-5} \boxed{} \xrightarrow{+8} \boxed{} \xrightarrow{-4} \boxed{} \xrightarrow{+4} \boxed{} \xrightarrow{+1} \boxed{} \xrightarrow{-8} \boxed{}$$

Continuar las series:

$$45 \Rightarrow 49 \Rightarrow 53 \Rightarrow \quad \Rightarrow \quad \Rightarrow \quad \Rightarrow \quad \Rightarrow \quad \Rightarrow$$

$$39 \Rightarrow 38 \Rightarrow 37 \Rightarrow \quad \Rightarrow \quad \Rightarrow \quad \Rightarrow \quad \Rightarrow \quad \Rightarrow$$

Completar:

7	4	0	2	→	ⓧ13
0	0	1	0	→	○
3	1	1	3	→	○
5	1	5	1	→	○

↓ ↓ ↓ ↓

○ ○ ○ ○

5	4	0	□
9		□	4
□		□	
□			

$$- \begin{array}{r} 6 \ 1 \\ \dots \ \dots \\ \hline 6 \ 0 \end{array} \quad + \begin{array}{r} 4 \ 6 \\ \dots \ \dots \\ \hline 5 \ 2 \end{array}$$

Completar:

$$8 + 8 + \underline{\quad} = 18 \qquad 2 + 2 + \underline{\quad} = 5$$
$$80 + 10 = \boxed{} \qquad 80 - 30 = \boxed{} \qquad 0 + \underline{\quad} = 60$$
$$20 - 1 = \boxed{} \qquad 58 + \underline{\quad} = 64 \qquad 81 + \underline{\quad} = 89$$

Sumar y restar:

$$\boxed{2} + \dots \boxed{5} + \dots \boxed{5} - \dots \boxed{1} + \dots \boxed{4} - \dots \boxed{0} + \dots \boxed{2} - \dots \boxed{0} + \dots \boxed{5}$$

Colocar y sumar:

46 + 12 + 1

3 + 78 + 12

www.fichas.net

15 + 2 + 70

Nombre: _____

Fecha: _____

Calcular mentalmente

$$\boxed{1} \xrightarrow{+5} \boxed{} \xrightarrow{+8} \boxed{} \xrightarrow{-6} \boxed{} \xrightarrow{+5} \boxed{} \xrightarrow{-8} \boxed{} \xrightarrow{+8} \boxed{} \xrightarrow{+6} \boxed{} \xrightarrow{-3} \boxed{}$$

$$\boxed{3} \xrightarrow{+4} \boxed{} \xrightarrow{+2} \boxed{} \xrightarrow{-6} \boxed{} \xrightarrow{+7} \boxed{} \xrightarrow{-8} \boxed{} \xrightarrow{+2} \boxed{} \xrightarrow{+7} \boxed{} \xrightarrow{-0} \boxed{}$$

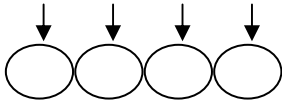
Continuar las series:

$$34 \Rightarrow 39 \Rightarrow 44 \Rightarrow \quad \Rightarrow \quad \Rightarrow \quad \Rightarrow \quad \Rightarrow \quad \Rightarrow$$

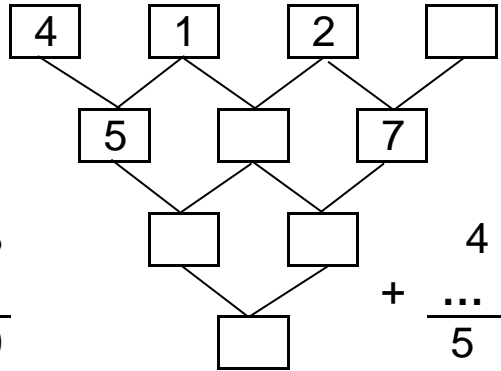
$$34 \Rightarrow 32 \Rightarrow 30 \Rightarrow \quad \Rightarrow \quad \Rightarrow \quad \Rightarrow \quad \Rightarrow \quad \Rightarrow$$

Completar:

4	1	2	3	→	⊙10
1	2	1	3	→	⊙
2	0	4	5	→	⊙
2	1	3	4	→	⊙



$$\begin{array}{r} 4 \ 3 \\ - \dots \dots \\ \hline 4 \ 0 \end{array}$$



$$\begin{array}{r} 4 \ 8 \\ + \dots \dots \\ \hline 5 \ 7 \end{array}$$

Completar:

$$2 + 2 + \underline{\quad} = 10$$

$$1 + 1 + \underline{\quad} = 6$$

$$0 + 0 = \boxed{}$$

$$0 - 0 = \boxed{}$$

$$90 + \underline{\quad} = 90$$

$$18 - 1 = \boxed{}$$

$$72 + \underline{\quad} = 79$$

$$73 + \underline{\quad} = 79$$

Sumar y restar:

$$\boxed{3} + \dots \boxed{6} + \dots \boxed{10} - \dots \boxed{9} + \dots \boxed{10} - \dots \boxed{10} + \dots \boxed{11} - \dots \boxed{8} + \dots \boxed{10}$$

Colocar y sumar:

46 + 14 + 7

5 + 55 + 11

www.fichas.net

13 + 2 + 29

Nombre: _____

Fecha: _____

Calcular mentalmente

$0 \xrightarrow{+8} \square \xrightarrow{+2} \square \xrightarrow{-2} \square \xrightarrow{+5} \square \xrightarrow{-5} \square \xrightarrow{+3} \square \xrightarrow{+1} \square \xrightarrow{-0} \square$

$4 \xrightarrow{+5} \square \xrightarrow{+5} \square \xrightarrow{-8} \square \xrightarrow{+7} \square \xrightarrow{-6} \square \xrightarrow{+3} \square \xrightarrow{+0} \square \xrightarrow{-7} \square$

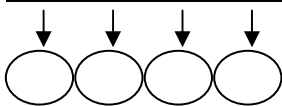
Continuar las series:

$45 \Rightarrow 50 \Rightarrow 55 \Rightarrow \Rightarrow \Rightarrow \Rightarrow \Rightarrow \Rightarrow \Rightarrow$

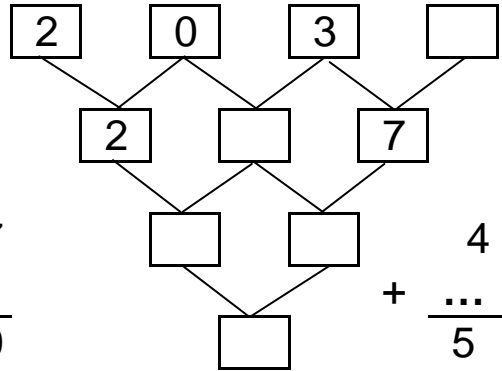
$56 \Rightarrow 54 \Rightarrow 52 \Rightarrow \Rightarrow \Rightarrow \Rightarrow \Rightarrow \Rightarrow \Rightarrow$

Completar:

3	5	3	2	→	13
1	3	2	0	→	○
3	4	0	9	→	○
2	1	4	6	→	○



$$\begin{array}{r} 6 \ 7 \\ - \dots \dots \\ \hline 6 \ 0 \end{array}$$



Completar:

$1 + 1 + \underline{\quad} = 6$ $2 + 2 + \underline{\quad} = 6$

$10 + 80 = \square$ $80 - 50 = \square$ $30 + \underline{\quad} = 90$

$17 - 7 = \square$ $67 + \underline{\quad} = 76$ $82 + \underline{\quad} = 91$

Sumar y restar:

$4 + \dots$ $6 + \dots$ $8 - \dots$ $7 + \dots$ $11 - \dots$ $9 + \dots$ $12 - \dots$ $11 + \dots$ 12

Colocar y sumar:

$37 + 15 + 1$
□

$5 + 47 + 10$
□

www.fichas.net

$12 + 1 + 61$
□

Nombre: _____

Fecha: _____

Calcular mentalmente

$3 \xrightarrow{+5} \square \xrightarrow{+2} \square \xrightarrow{-8} \square \xrightarrow{+2} \square \xrightarrow{-2} \square \xrightarrow{+1} \square \xrightarrow{+9} \square \xrightarrow{-0} \square$

$9 \xrightarrow{+6} \square \xrightarrow{+0} \square \xrightarrow{-9} \square \xrightarrow{+9} \square \xrightarrow{-5} \square \xrightarrow{+7} \square \xrightarrow{+6} \square \xrightarrow{-5} \square$

Continuar las series:

$42 \Rightarrow 45 \Rightarrow 48 \Rightarrow \square \Rightarrow \square \Rightarrow \square \Rightarrow \square \Rightarrow \square$

$81 \Rightarrow 80 \Rightarrow 79 \Rightarrow \square \Rightarrow \square \Rightarrow \square \Rightarrow \square \Rightarrow \square$

Completar:

8	4	2	2	→	ⓧ16
1	2	1	4	→	○
2	9	3	8	→	○
2	1	4	4	→	○

↓ ↓ ↓ ↓

○ ○ ○ ○

4	5	0	□
9	□	0	
□	□		
□			

$$- \begin{array}{r} 63 \\ \dots \dots \\ 60 \end{array} + \begin{array}{r} 75 \\ \dots \dots \\ 87 \end{array}$$

Completar:

$5 + 5 + \underline{\quad} = 17$

$8 + 8 + \underline{\quad} = 22$

$30 + 60 = \square$

$0 - 0 = \square$

$70 + \underline{\quad} = 90$

$12 - 8 = \square$

$67 + \underline{\quad} = 72$

$71 + \underline{\quad} = 77$

Sumar y restar:

$1 + \dots 5 + \dots 9 - \dots 7 + \dots 11 - \dots 7 + \dots 11 - \dots 8 + \dots 9$

Colocar y sumar:

54 + 13 + 4

4 + 46 + 12

www.fichas.net

11 + 1 + 26

Nombre: _____

Fecha: _____

Calcular mentalmente

$$\boxed{6} \xrightarrow{+1} \boxed{} \xrightarrow{+2} \boxed{} \xrightarrow{-6} \boxed{} \xrightarrow{+3} \boxed{} \xrightarrow{-4} \boxed{} \xrightarrow{+6} \boxed{} \xrightarrow{+5} \boxed{} \xrightarrow{-2} \boxed{}$$

$$\boxed{3} \xrightarrow{+5} \boxed{} \xrightarrow{+4} \boxed{} \xrightarrow{-3} \boxed{} \xrightarrow{+1} \boxed{} \xrightarrow{-9} \boxed{} \xrightarrow{+6} \boxed{} \xrightarrow{+6} \boxed{} \xrightarrow{-8} \boxed{}$$

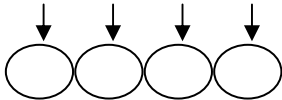
Continuar las series:

$$33 \Rightarrow 34 \Rightarrow 35 \Rightarrow \Rightarrow \Rightarrow \Rightarrow \Rightarrow \Rightarrow \Rightarrow$$

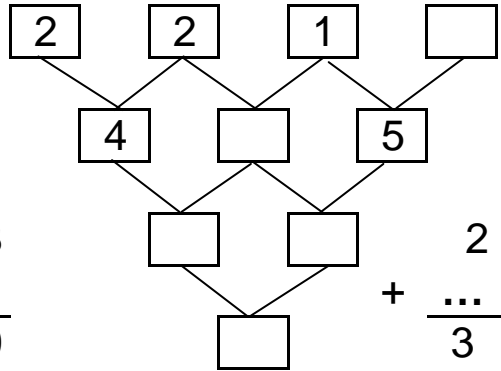
$$37 \Rightarrow 34 \Rightarrow 31 \Rightarrow \Rightarrow \Rightarrow \Rightarrow \Rightarrow \Rightarrow \Rightarrow$$

Completar:

9	2	2	1
3	1	1	1
1	8	2	6
3	1	4	6



$$\begin{array}{r} 6 \ 8 \\ - \dots \dots \\ \hline 6 \ 0 \end{array}$$



Completar:

$$1 + 1 + \underline{\quad} = 5 \qquad 4 + 4 + \underline{\quad} = 14$$

$$10 + 70 = \boxed{} \qquad 70 - 40 = \boxed{} \qquad 20 + \underline{\quad} = 60$$

$$11 - 4 = \boxed{} \qquad 81 + \underline{\quad} = 90 \qquad 76 + \underline{\quad} = 83$$

Sumar y restar:

$$\boxed{3} + \dots \boxed{4} + \dots \boxed{7} - \dots \boxed{5} + \dots \boxed{7} - \dots \boxed{4} + \dots \boxed{7} - \dots \boxed{5} + \dots \boxed{7}$$

Colocar y sumar:

47 + 13 + 9

1 + 32 + 10

www.fichas.net

18 + 2 + 25

Nombre: _____

Fecha: _____

Calcular mentalmente

$5 \xrightarrow{+8} \square \xrightarrow{+4} \square \xrightarrow{-7} \square \xrightarrow{+6} \square \xrightarrow{-1} \square \xrightarrow{+7} \square \xrightarrow{+6} \square \xrightarrow{-1} \square$

$9 \xrightarrow{+1} \square \xrightarrow{+5} \square \xrightarrow{-5} \square \xrightarrow{+4} \square \xrightarrow{-7} \square \xrightarrow{+7} \square \xrightarrow{+0} \square \xrightarrow{-2} \square$

Continuar las series:

$12 \Rightarrow 14 \Rightarrow 16 \Rightarrow \square \Rightarrow \square \Rightarrow \square \Rightarrow \square \Rightarrow \square$

$77 \Rightarrow 72 \Rightarrow 67 \Rightarrow \square \Rightarrow \square \Rightarrow \square \Rightarrow \square \Rightarrow \square$

Completar:

5	3	1	3	→	⓫
2	4	2	4	→	○
1	7	1	1	→	○
2	2	1	2	→	○

↓ ↓ ↓ ↓

○ ○ ○ ○

4	1	1	□
5		□	2
□	□		
□			

$$\begin{array}{r} 71 \\ - \dots \\ \hline 70 \end{array} \quad + \quad \begin{array}{r} 67 \\ + \dots \\ \hline 77 \end{array}$$

Completar:

$2 + 2 + \underline{\quad} = 10$ $4 + 4 + \underline{\quad} = 11$

$10 + 40 = \square$ $30 - 30 = \square$ $90 + \underline{\quad} = 90$

$19 - 2 = \square$ $86 + \underline{\quad} = 93$ $66 + \underline{\quad} = 71$

Sumar y restar:

$5 + \dots + 7 + \dots + 11 - \dots - 8 + \dots + 9 - \dots - 4 + \dots + 5 - \dots - 3 + \dots + 8$

Colocar y sumar:

49 + 13 + 2

1 + 70 + 12

www.fichas.net

12 + 3 + 28

Nombre: _____

Fecha: _____

Calcular mentalmente

$$\boxed{1} \xrightarrow{+4} \boxed{} \xrightarrow{+8} \boxed{} \xrightarrow{-3} \boxed{} \xrightarrow{+0} \boxed{} \xrightarrow{-6} \boxed{} \xrightarrow{+7} \boxed{} \xrightarrow{+7} \boxed{} \xrightarrow{-6} \boxed{}$$

$$\boxed{8} \xrightarrow{+2} \boxed{} \xrightarrow{+2} \boxed{} \xrightarrow{-8} \boxed{} \xrightarrow{+4} \boxed{} \xrightarrow{-7} \boxed{} \xrightarrow{+8} \boxed{} \xrightarrow{+6} \boxed{} \xrightarrow{-1} \boxed{}$$

Continuar las series:

$$17 \Rightarrow 18 \Rightarrow 19 \Rightarrow \Rightarrow \Rightarrow \Rightarrow \Rightarrow \Rightarrow \Rightarrow$$

$$60 \Rightarrow 58 \Rightarrow 56 \Rightarrow \Rightarrow \Rightarrow \Rightarrow \Rightarrow \Rightarrow \Rightarrow$$

Completar:

1	1	1	1
2	4	3	3
0	6	0	3
1	2	1	8

→ (4)
→ ○
→ ○
→ ○

↓ ↓ ↓ ↓

○ ○ ○ ○

4	5	0	□
9		□	1
□		□	
□			

$$- \begin{array}{r} 59 \\ \dots \dots \\ 50 \end{array} + \begin{array}{r} 32 \\ \dots \dots \\ 47 \end{array}$$

Completar:

$$7 + 7 + \underline{\quad} = 21$$

$$3 + 3 + \underline{\quad} = 9$$

$$80 + 0 = \boxed{}$$

$$10 - 10 = \boxed{}$$

$$40 + \underline{\quad} = 90$$

$$10 - 5 = \boxed{}$$

$$54 + \underline{\quad} = 63$$

$$69 + \underline{\quad} = 76$$

Sumar y restar:

$$\boxed{2} + \dots \boxed{6} + \dots \boxed{11} - \dots \boxed{7} + \dots \boxed{11} - \dots \boxed{9} + \dots \boxed{12} - \dots \boxed{9} + \dots \boxed{12}$$

Colocar y sumar:

22 + 11 + 1

1 + 39 + 11

www.fichas.net

13 + 2 + 36

Nombre: _____

Fecha: _____

Calcular mentalmente

$\boxed{3} \xrightarrow{+7} \boxed{} \xrightarrow{+3} \boxed{} \xrightarrow{-3} \boxed{} \xrightarrow{+0} \boxed{} \xrightarrow{-4} \boxed{} \xrightarrow{+2} \boxed{} \xrightarrow{+2} \boxed{} \xrightarrow{-0} \boxed{}$

$\boxed{4} \xrightarrow{+4} \boxed{} \xrightarrow{+7} \boxed{} \xrightarrow{-3} \boxed{} \xrightarrow{+3} \boxed{} \xrightarrow{-6} \boxed{} \xrightarrow{+1} \boxed{} \xrightarrow{+1} \boxed{} \xrightarrow{-3} \boxed{}$

Continuar las series:

$40 \Rightarrow 43 \Rightarrow 46 \Rightarrow \Rightarrow \Rightarrow \Rightarrow \Rightarrow $

$55 \Rightarrow 51 \Rightarrow 47 \Rightarrow \Rightarrow \Rightarrow \Rightarrow \Rightarrow $

Completar:

3	0	1	4	→	⊙
0	1	1	4	→	⊙
2	1	1	8	→	⊙
3	3	2	5	→	⊙

↓ ↓ ↓ ↓

⊙ ⊙ ⊙ ⊙

0	1	5	⊙
1	⊙	9	
⊙	⊙		
⊙			

$$- \begin{array}{r} 5 \ 8 \\ \dots \ \dots \\ \hline 5 \ 0 \end{array} \quad + \begin{array}{r} 5 \ 4 \\ \dots \ \dots \\ \hline 6 \ 4 \end{array}$$

Completar:

$2 + 2 + \underline{} = 6$ $3 + 3 + \underline{} = 7$

$30 + 30 = \boxed{}$ $60 - 10 = \boxed{}$ $10 + \underline{} = 70$

$12 - 7 = \boxed{}$ $51 + \underline{} = 58$ $84 + \underline{} = 90$

Sumar y restar:

$\boxed{0} + \dots \boxed{2} + \dots \boxed{4} - \dots \boxed{3} + \dots \boxed{4} - \dots \boxed{3} + \dots \boxed{7} - \dots \boxed{3} + \dots \boxed{4}$

Colocar y sumar:

28 + 11 + 4

3 + 63 + 12

www.fichas.net

11 + 0 + 21

Nombre: _____

Fecha: _____

Calcular mentalmente

$1 \xrightarrow{+7} \square \xrightarrow{+3} \square \xrightarrow{-2} \square \xrightarrow{+4} \square \xrightarrow{-9} \square \xrightarrow{+4} \square \xrightarrow{+9} \square \xrightarrow{-1} \square$

$2 \xrightarrow{+4} \square \xrightarrow{+2} \square \xrightarrow{-1} \square \xrightarrow{+1} \square \xrightarrow{-5} \square \xrightarrow{+5} \square \xrightarrow{+2} \square \xrightarrow{-0} \square$

Continuar las series:

$9 \Rightarrow 11 \Rightarrow 13 \Rightarrow \square \Rightarrow \square \Rightarrow \square \Rightarrow \square \Rightarrow \square$

$95 \Rightarrow 93 \Rightarrow 91 \Rightarrow \square \Rightarrow \square \Rightarrow \square \Rightarrow \square \Rightarrow \square$

Completar:

7	2	1	2	→	⊙12
0	1	0	4	→	⊙
4	3	5	7	→	⊙
4	2	4	5	→	⊙

↓ ↓ ↓ ↓

⊙ ⊙ ⊙ ⊙

4	1	4	□
5		□	7
□	□		
□			

$9 \begin{array}{r} 2 \\ - \dots \\ \hline 9 \end{array} \begin{array}{r} 0 \\ \dots \\ \hline 0 \end{array}$ $6 \begin{array}{r} 4 \\ + \dots \\ \hline 7 \end{array} \begin{array}{r} 0 \\ \dots \\ \hline 0 \end{array}$

Completar:

$0 + 0 + \underline{\quad} = 7$ $1 + 1 + \underline{\quad} = 6$

$80 + 10 = \square$ $10 - 0 = \square$ $80 + \underline{\quad} = 90$

$16 - 3 = \square$ $78 + \underline{\quad} = 84$ $50 + \underline{\quad} = 58$

Sumar y restar:

$0 + \dots 0 + \dots 2 - \dots 1 + \dots 5 - \dots 3 + \dots 4 - \dots 2 + \dots 5$

Colocar y sumar:

29 + 14 + 6

2 + 71 + 11

www.fichas.net

11 + 1 + 34

Nombre: _____

Fecha: _____

Calcular mentalmente

$$\boxed{4} \xrightarrow{+2} \boxed{} \xrightarrow{+4} \boxed{} \xrightarrow{-3} \boxed{} \xrightarrow{+4} \boxed{} \xrightarrow{-4} \boxed{} \xrightarrow{+9} \boxed{} \xrightarrow{+6} \boxed{} \xrightarrow{-6} \boxed{}$$

$$\boxed{0} \xrightarrow{+1} \boxed{} \xrightarrow{+6} \boxed{} \xrightarrow{-3} \boxed{} \xrightarrow{+9} \boxed{} \xrightarrow{-8} \boxed{} \xrightarrow{+3} \boxed{} \xrightarrow{+1} \boxed{} \xrightarrow{-6} \boxed{}$$

Continuar las series:

$$56 \Rightarrow 60 \Rightarrow 64 \Rightarrow \quad \Rightarrow \quad \Rightarrow \quad \Rightarrow \quad \Rightarrow \quad \Rightarrow$$

$$96 \Rightarrow 93 \Rightarrow 90 \Rightarrow \quad \Rightarrow \quad \Rightarrow \quad \Rightarrow \quad \Rightarrow \quad \Rightarrow$$

Completar:

5	0	0	3	→	⊙
1	4	0	2	→	⊙
0	0	2	1	→	⊙
1	2	4	7	→	⊙

↓ ↓ ↓ ↓

⊙ ⊙ ⊙ ⊙

1	2	4	⊙
	3	⊙	8
		⊙	⊙
			⊙

$$- \begin{array}{r} 82 \\ \dots \dots \\ 80 \end{array} + \begin{array}{r} 78 \\ \dots \dots \\ 86 \end{array}$$

Completar:

$$8 + 8 + \underline{\quad} = 21 \qquad 2 + 2 + \underline{\quad} = 11$$

$$70 + 10 = \boxed{} \qquad 60 - 30 = \boxed{} \qquad 70 + \underline{\quad} = 70$$

$$16 - 7 = \boxed{} \qquad 72 + \underline{\quad} = 80 \qquad 68 + \underline{\quad} = 76$$

Sumar y restar:

$$\boxed{1} + \dots \boxed{4} + \dots \boxed{7} - \dots \boxed{4} + \dots \boxed{5} - \dots \boxed{1} + \dots \boxed{5} - \dots \boxed{1} + \dots \boxed{3}$$

Colocar y sumar:

25 + 13 + 3

2 + 23 + 12

www.fichas.net

18 + 1 + 46

Nombre: _____

Fecha: _____

Calcular mentalmente

$1 \xrightarrow{+4} \square \xrightarrow{+6} \square \xrightarrow{-3} \square \xrightarrow{+4} \square \xrightarrow{-3} \square \xrightarrow{+4} \square \xrightarrow{+9} \square \xrightarrow{-0} \square$

$5 \xrightarrow{+6} \square \xrightarrow{+3} \square \xrightarrow{-1} \square \xrightarrow{+5} \square \xrightarrow{-2} \square \xrightarrow{+9} \square \xrightarrow{+3} \square \xrightarrow{-3} \square$

Continuar las series:

$4 \Rightarrow 8 \Rightarrow 12 \Rightarrow \square \Rightarrow \square \Rightarrow \square \Rightarrow \square \Rightarrow \square$

$45 \Rightarrow 41 \Rightarrow 37 \Rightarrow \square \Rightarrow \square \Rightarrow \square \Rightarrow \square \Rightarrow \square$

Completar:

0	0	1	2	→	○
2	1	3	2	→	○
2	3	1	5	→	○
2	1	5	6	→	○

↓ ↓ ↓ ↓

○ ○ ○ ○

4	0	3	□
4	□	3	
□	□		
□			

$$\begin{array}{r} 87 \\ - \dots \dots \\ \hline 80 \end{array}$$

$$\begin{array}{r} 58 \\ + \dots \dots \\ \hline 63 \end{array}$$

Completar:

$8 + 8 + \square = 23$ $0 + 0 + \square = 4$

$80 + 10 = \square$ $40 - 30 = \square$ $80 + \square = 80$

$16 - 7 = \square$ $53 + \square = 61$ $52 + \square = 58$

Sumar y restar:

$2 + \dots 7 + \dots 10 - \dots 7 + \dots 8 - \dots 5 + \dots 7 - \dots 6 + \dots 7$

Colocar y sumar:

51 + 15 + 3

5 + 46 + 12

www.fichas.net

19 + 2 + 73

Nombre: _____

Fecha: _____

Calcular mentalmente

$0 \xrightarrow{+4} \square \xrightarrow{+6} \square \xrightarrow{-9} \square \xrightarrow{+4} \square \xrightarrow{-3} \square \xrightarrow{+3} \square \xrightarrow{+3} \square \xrightarrow{-0} \square$

$8 \xrightarrow{+6} \square \xrightarrow{+5} \square \xrightarrow{-2} \square \xrightarrow{+1} \square \xrightarrow{-6} \square \xrightarrow{+6} \square \xrightarrow{+4} \square \xrightarrow{-2} \square$

Continuar las series:

$36 \Rightarrow 39 \Rightarrow 42 \Rightarrow \square \Rightarrow \square \Rightarrow \square \Rightarrow \square \Rightarrow \square$

$92 \Rightarrow 90 \Rightarrow 88 \Rightarrow \square \Rightarrow \square \Rightarrow \square \Rightarrow \square \Rightarrow \square$

Completar:

1	0	0	3	→	④
3	0	3	3	→	○
4	2	0	6	→	○
1	1	3	7	→	○

↓ ↓ ↓ ↓

○ ○ ○ ○

3	4	2	□
7	□	4	
□	□		
□			

$$- \begin{array}{r} 65 \\ \dots \dots \\ 60 \end{array} + \begin{array}{r} 55 \\ \dots \dots \\ 65 \end{array}$$

Completar:

$6 + 6 + \square = 19$

$8 + 8 + \square = 24$

$80 + 10 = \square$

$50 - 20 = \square$

$30 + \square = 50$

$13 - 8 = \square$

$52 + \square = 60$

$74 + \square = 81$

Sumar y restar:

$7 + \dots 12 + \dots 15 - \dots 14 + \dots 19 - \dots 16 + \dots 21 - \dots 20 + \dots 23$

Colocar y sumar:

$61 + 16 + 4$

--

$5 + 58 + 11$

--

www.fichas.net

$11 + 0 + 23$

--

Nombre: _____

Fecha: _____

Calcular mentalmente

$0 \xrightarrow{+3} \square \xrightarrow{+3} \square \xrightarrow{-4} \square \xrightarrow{+6} \square \xrightarrow{-3} \square \xrightarrow{+8} \square \xrightarrow{+5} \square \xrightarrow{-1} \square$

$0 \xrightarrow{+7} \square \xrightarrow{+4} \square \xrightarrow{-7} \square \xrightarrow{+4} \square \xrightarrow{-6} \square \xrightarrow{+2} \square \xrightarrow{+8} \square \xrightarrow{-7} \square$

Continuar las series:

$34 \Rightarrow 39 \Rightarrow 44 \Rightarrow \square \Rightarrow \square \Rightarrow \square \Rightarrow \square \Rightarrow \square$

$56 \Rightarrow 52 \Rightarrow 48 \Rightarrow \square \Rightarrow \square \Rightarrow \square \Rightarrow \square \Rightarrow \square$

Completar:

0	2	0	3	→	5
3	5	3	3	→	○
2	2	0	1	→	○
1	1	0	5	→	○

↓ ↓ ↓ ↓

○ ○ ○ ○

2	0	2	□
2	□	5	
□	□		
□			

$$\begin{array}{r} 13 \\ - \dots \\ \hline 10 \end{array}$$

$$\begin{array}{r} 48 \\ + \dots \\ \hline 54 \end{array}$$

Completar:

$5 + 5 + \underline{\quad} = 19$

$1 + 1 + \underline{\quad} = 6$

$60 + 10 = \square$

$70 - 50 = \square$

$70 + \underline{\quad} = 80$

$11 - 5 = \square$

$84 + \underline{\quad} = 91$

$75 + \underline{\quad} = 80$

Sumar y restar:

$\square + \dots \square + \dots \square - \dots \square + \dots \square - \dots \square + \dots \square - \dots \square + \dots \square$

Colocar y sumar:

42 + 13 + 2

4 + 67 + 12

www.fichas.net

16 + 2 + 41

Nombre: _____

Fecha: _____

Calcular mentalmente

$$\boxed{8} \xrightarrow{+7} \boxed{} \xrightarrow{+5} \boxed{} \xrightarrow{-5} \boxed{} \xrightarrow{+7} \boxed{} \xrightarrow{-6} \boxed{} \xrightarrow{+0} \boxed{} \xrightarrow{+6} \boxed{} \xrightarrow{-8} \boxed{}$$

$$\boxed{4} \xrightarrow{+2} \boxed{} \xrightarrow{+5} \boxed{} \xrightarrow{-2} \boxed{} \xrightarrow{+2} \boxed{} \xrightarrow{-8} \boxed{} \xrightarrow{+6} \boxed{} \xrightarrow{+8} \boxed{} \xrightarrow{-7} \boxed{}$$

Continuar las series:

$$15 \Rightarrow 18 \Rightarrow 21 \Rightarrow \quad \Rightarrow \quad \Rightarrow \quad \Rightarrow \quad \Rightarrow \quad \Rightarrow$$

$$75 \Rightarrow 72 \Rightarrow 69 \Rightarrow \quad \Rightarrow \quad \Rightarrow \quad \Rightarrow \quad \Rightarrow \quad \Rightarrow$$

Completar:

5	5	1	4	→	ⓧ15
1	3	1	1	→	⊙
1	6	2	2	→	⊙
2	3	4	4	→	⊙

↓ ↓ ↓ ↓

⊙ ⊙ ⊙ ⊙

1	0	4	□
1	□	7	
□	□		
□			

- $\begin{array}{r} 32 \\ \dots \\ 30 \end{array}$ + $\begin{array}{r} 45 \\ \dots \\ 55 \end{array}$

Completar:

$$0 + 0 + \underline{\quad} = 6 \qquad 0 + 0 + \underline{\quad} = 2$$

$$70 + 10 = \boxed{} \qquad 90 - 50 = \boxed{} \qquad 30 + \underline{\quad} = 40$$

$$18 - 3 = \boxed{} \qquad 68 + \underline{\quad} = 73 \qquad 65 + \underline{\quad} = 74$$

Sumar y restar:

$$\boxed{8} + \dots \boxed{10} + \dots \boxed{12} - \dots \boxed{8} + \dots \boxed{13} - \dots \boxed{8} + \dots \boxed{11} - \dots \boxed{7} + \dots \boxed{11}$$

Colocar y sumar:

51 + 11 + 6

1 + 69 + 12

www.fichas.net

10 + 3 + 29

Nombre: _____

Fecha: _____

Calcular mentalmente

$$\boxed{4} \xrightarrow{+1} \boxed{} \xrightarrow{+6} \boxed{} \xrightarrow{-2} \boxed{} \xrightarrow{+3} \boxed{} \xrightarrow{-3} \boxed{} \xrightarrow{+6} \boxed{} \xrightarrow{+6} \boxed{} \xrightarrow{-7} \boxed{}$$

$$\boxed{1} \xrightarrow{+5} \boxed{} \xrightarrow{+6} \boxed{} \xrightarrow{-5} \boxed{} \xrightarrow{+2} \boxed{} \xrightarrow{-1} \boxed{} \xrightarrow{+5} \boxed{} \xrightarrow{+0} \boxed{} \xrightarrow{-8} \boxed{}$$

Continuar las series:

$$31 \Rightarrow 36 \Rightarrow 41 \Rightarrow \quad \Rightarrow \quad \Rightarrow \quad \Rightarrow \quad \Rightarrow \quad \Rightarrow$$

$$62 \Rightarrow 60 \Rightarrow 58 \Rightarrow \quad \Rightarrow \quad \Rightarrow \quad \Rightarrow \quad \Rightarrow \quad \Rightarrow$$

Completar:

0	4	3	2	→	○9
1	3	1	4	→	○
3	3	3	7	→	○
2	3	3	1	→	○

↓ ↓ ↓ ↓

○ ○ ○ ○

3	3	3	□
6		□	3
□	□		
□			

$$- \begin{array}{r} 83 \\ \dots \dots \\ 80 \end{array} + \begin{array}{r} 32 \\ \dots \dots \\ 45 \end{array}$$

Completar:

$$2 + 2 + \underline{\quad} = 7 \qquad 1 + 1 + \underline{\quad} = 4$$

$$80 + 10 = \boxed{} \qquad 50 - 30 = \boxed{} \qquad 40 + \underline{\quad} = 70$$

$$17 - 9 = \boxed{} \qquad 76 + \underline{\quad} = 84 \qquad 78 + \underline{\quad} = 84$$

Sumar y restar:

$$\boxed{1} + \dots \boxed{5} + \dots \boxed{5} - \dots \boxed{3} + \dots \boxed{7} - \dots \boxed{7} + \dots \boxed{11} - \dots \boxed{11} + \dots \boxed{12}$$

Colocar y sumar:

73 + 10 + 2

5 + 33 + 11

www.fichas.net

11 + 2 + 71

Nombre: _____

Fecha: _____

Calcular mentalmente

$\boxed{2} \xrightarrow{+2} \boxed{} \xrightarrow{+1} \boxed{} \xrightarrow{-1} \boxed{} \xrightarrow{+7} \boxed{} \xrightarrow{-4} \boxed{} \xrightarrow{+8} \boxed{} \xrightarrow{+7} \boxed{} \xrightarrow{-0} \boxed{}$

$\boxed{7} \xrightarrow{+3} \boxed{} \xrightarrow{+0} \boxed{} \xrightarrow{-2} \boxed{} \xrightarrow{+6} \boxed{} \xrightarrow{-6} \boxed{} \xrightarrow{+8} \boxed{} \xrightarrow{+2} \boxed{} \xrightarrow{-2} \boxed{}$

Continuar las series:

$32 \Rightarrow 35 \Rightarrow 38 \Rightarrow \Rightarrow \Rightarrow \Rightarrow \Rightarrow $

$99 \Rightarrow 95 \Rightarrow 91 \Rightarrow \Rightarrow \Rightarrow \Rightarrow \Rightarrow $

Completar:

1	4	2	2	→	⊙ 9
3	2	1	3	→	⊙
2	3	3	8	→	⊙
2	3	4	3	→	⊙

↓ ↓ ↓ ↓

⊙ ⊙ ⊙ ⊙

2	0	1	□
2	□	1	
□	□		
□			

$$- \begin{array}{r} 29 \\ \dots \dots \\ \hline 20 \end{array} + \begin{array}{r} 74 \\ \dots \dots \\ \hline 81 \end{array}$$

Completar:

$1 + 1 + \underline{} = 5$ $4 + 4 + \underline{} = 15$

$80 + 0 = \boxed{}$ $70 - 70 = \boxed{}$ $10 + \underline{} = 20$

$11 - 5 = \boxed{}$ $65 + \underline{} = 73$ $59 + \underline{} = 68$

Sumar y restar:

$\boxed{4} + \dots \boxed{9} + \dots \boxed{11} - \dots \boxed{9} + \dots \boxed{12} - \dots \boxed{9} + \dots \boxed{12} - \dots \boxed{11} + \dots \boxed{11}$

Colocar y sumar:

69 + 11 + 3

3 + 24 + 12

www.fichas.net

18 + 1 + 61

Nombre: _____

Fecha: _____

Calcular mentalmente

$5 \xrightarrow{+6} \square \xrightarrow{+8} \square \xrightarrow{-1} \square \xrightarrow{+1} \square \xrightarrow{-0} \square \xrightarrow{+8} \square \xrightarrow{+2} \square \xrightarrow{-1} \square$

$1 \xrightarrow{+0} \square \xrightarrow{+5} \square \xrightarrow{-3} \square \xrightarrow{+4} \square \xrightarrow{-4} \square \xrightarrow{+3} \square \xrightarrow{+7} \square \xrightarrow{-7} \square$

Continuar las series:

$48 \Rightarrow 52 \Rightarrow 56 \Rightarrow \Rightarrow \Rightarrow \Rightarrow \Rightarrow \Rightarrow$

$81 \Rightarrow 77 \Rightarrow 73 \Rightarrow \Rightarrow \Rightarrow \Rightarrow \Rightarrow \Rightarrow$

Completar:

9	2	1	3	→	15
1	4	2	3	→	○
5	5	0	8	→	○
5	0	1	8	→	○

↓ ↓ ↓ ↓

○ ○ ○ ○

4	4	4	□
8		□	7
□		□	
□			

- $\begin{array}{r} 73 \\ \dots \dots \\ 70 \end{array}$

+ $\begin{array}{r} 56 \\ \dots \dots \\ 66 \end{array}$

Completar:

$2 + 2 + \underline{\quad} = 8$ $3 + 3 + \underline{\quad} = 6$

$10 + 30 = \square$ $10 - 0 = \square$ $50 + \underline{\quad} = 60$

$14 - 7 = \square$ $66 + \underline{\quad} = 72$ $53 + \underline{\quad} = 60$

Sumar y restar:

$3 + \dots 6 + \dots 11 - \dots 10 + \dots 14 - \dots 12 + \dots 17 - \dots 17 + \dots 19$

Colocar y sumar:

61 + 11 + 5

3 + 44 + 13

www.fichas.net

11 + 2 + 31

Nombre: _____

Fecha: _____

Calcular mentalmente

$$\boxed{5} \xrightarrow{+6} \boxed{} \xrightarrow{+2} \boxed{} \xrightarrow{-8} \boxed{} \xrightarrow{+6} \boxed{} \xrightarrow{-7} \boxed{} \xrightarrow{+3} \boxed{} \xrightarrow{+9} \boxed{} \xrightarrow{-3} \boxed{}$$

$$\boxed{8} \xrightarrow{+7} \boxed{} \xrightarrow{+3} \boxed{} \xrightarrow{-7} \boxed{} \xrightarrow{+8} \boxed{} \xrightarrow{-8} \boxed{} \xrightarrow{+7} \boxed{} \xrightarrow{+5} \boxed{} \xrightarrow{-1} \boxed{}$$

Continuar las series:

$$40 \Rightarrow 44 \Rightarrow 48 \Rightarrow \quad \Rightarrow \quad \Rightarrow \quad \Rightarrow \quad \Rightarrow \quad \Rightarrow$$

$$93 \Rightarrow 90 \Rightarrow 87 \Rightarrow \quad \Rightarrow \quad \Rightarrow \quad \Rightarrow \quad \Rightarrow \quad \Rightarrow$$

Completar:

0	3	1	4	→	⊙
3	3	2	1	→	⊙
3	7	0	5	→	⊙
4	2	4	2	→	⊙

↓ ↓ ↓ ↓

⊙ ⊙ ⊙ ⊙

0	3	2	□
3	□	3	
□	□		
	□		

$$- \begin{array}{r} 47 \\ \dots \dots \\ 40 \end{array} \quad + \begin{array}{r} 49 \\ \dots \dots \\ 57 \end{array}$$

Completar:

$$5 + 5 + \underline{\quad} = 14 \qquad 7 + 7 + \underline{\quad} = 20$$

$$80 + 0 = \boxed{} \qquad 60 - 0 = \boxed{} \qquad 60 + \underline{\quad} = 80$$

$$10 - 8 = \boxed{} \qquad 53 + \underline{\quad} = 59 \qquad 59 + \underline{\quad} = 67$$

Sumar y restar:

$$\boxed{3} + \dots \boxed{4} + \dots \boxed{4} - \dots \boxed{0} + \dots \boxed{3} - \dots \boxed{1} + \dots \boxed{3} - \dots \boxed{0} + \dots \boxed{0}$$

Colocar y sumar:

60 + 12 + 8

3 + 77 + 13

www.fichas.net

15 + 2 + 34

Nombre: _____

Fecha: _____

Calcular mentalmente

$\boxed{3} \xrightarrow{+7} \boxed{} \xrightarrow{+3} \boxed{} \xrightarrow{-5} \boxed{} \xrightarrow{+7} \boxed{} \xrightarrow{-4} \boxed{} \xrightarrow{+0} \boxed{} \xrightarrow{+5} \boxed{} \xrightarrow{-3} \boxed{}$

$\boxed{6} \xrightarrow{+6} \boxed{} \xrightarrow{+6} \boxed{} \xrightarrow{-9} \boxed{} \xrightarrow{+7} \boxed{} \xrightarrow{-8} \boxed{} \xrightarrow{+0} \boxed{} \xrightarrow{+2} \boxed{} \xrightarrow{-1} \boxed{}$

Continuar las series:

$5 \Rightarrow 7 \Rightarrow 9 \Rightarrow \Rightarrow \Rightarrow \Rightarrow \Rightarrow $

$58 \Rightarrow 57 \Rightarrow 56 \Rightarrow \Rightarrow \Rightarrow \Rightarrow \Rightarrow $

Completar:

5	0	0	1	→	⊙
0	3	0	1	→	⊙
2	8	4	1	→	⊙
0	1	4	0	→	⊙

↓ ↓ ↓ ↓

⊙ ⊙ ⊙ ⊙

3	3	3	⊙
6	⊙	8	
⊙	⊙		
⊙			

- $\begin{array}{r} 63 \\ \dots \dots \\ \hline 60 \end{array}$

+ $\begin{array}{r} 51 \\ \dots \dots \\ \hline 61 \end{array}$

Completar:

$0 + 0 + \underline{} = 4$ $6 + 6 + \underline{} = 14$

$50 + 30 = \boxed{}$ $80 - 80 = \boxed{}$ $20 + \underline{} = 60$

$17 - 4 = \boxed{}$ $79 + \underline{} = 87$ $58 + \underline{} = 64$

Sumar y restar:

$\boxed{6} + \dots \boxed{10} + \dots \boxed{14} - \dots \boxed{9} + \dots \boxed{13} - \dots \boxed{8} + \dots \boxed{11} - \dots \boxed{7} + \dots \boxed{11}$

Colocar y sumar:

$37 + 13 + 6$

--

$2 + 24 + 12$

--

www.fichas.net

$17 + 0 + 63$

--

Nombre: _____

Fecha: _____

Calcular mentalmente

$7 \xrightarrow{+7} \square \xrightarrow{+0} \square \xrightarrow{-3} \square \xrightarrow{+4} \square \xrightarrow{-7} \square \xrightarrow{+5} \square \xrightarrow{+2} \square \xrightarrow{-9} \square$

$7 \xrightarrow{+6} \square \xrightarrow{+0} \square \xrightarrow{-2} \square \xrightarrow{+7} \square \xrightarrow{-7} \square \xrightarrow{+6} \square \xrightarrow{+9} \square \xrightarrow{-9} \square$

Continuar las series:

$40 \Rightarrow 44 \Rightarrow 48 \Rightarrow \square \Rightarrow \square \Rightarrow \square \Rightarrow \square \Rightarrow \square$

$88 \Rightarrow 86 \Rightarrow 84 \Rightarrow \square \Rightarrow \square \Rightarrow \square \Rightarrow \square \Rightarrow \square$

Completar:

8	1	0	3	→	⊙12
1	4	2	1	→	⊙
1	3	0	3	→	⊙
2	2	1	7	→	⊙

↓ ↓ ↓ ↓

⊙ ⊙ ⊙ ⊙

4	1	4	□
5		□	7
□		□	
□			

$$- \begin{array}{r} 9 \ 1 \\ \dots \ \dots \\ 9 \ 0 \end{array} + \begin{array}{r} 6 \ 1 \\ \dots \ \dots \\ 7 \ 3 \end{array}$$

Completar:

$3 + 3 + \underline{\quad} = 13$

$6 + 6 + \underline{\quad} = 12$

$70 + 10 = \square$

$80 - 20 = \square$

$20 + \underline{\quad} = 60$

$13 - 4 = \square$

$69 + \underline{\quad} = 76$

$54 + \underline{\quad} = 62$

Sumar y restar:

$7 + \dots 7 + \dots 8 - \dots 4 + \dots 6 - \dots 6 + \dots 7 - \dots 5 + \dots 6$

Colocar y sumar:

69 + 10 + 7

1 + 64 + 10

www.fichas.net

14 + 0 + 68

Nombre: _____

Fecha: _____

Calcular mentalmente

$5 \xrightarrow{+2} \square \xrightarrow{+7} \square \xrightarrow{-2} \square \xrightarrow{+5} \square \xrightarrow{-5} \square \xrightarrow{+3} \square \xrightarrow{+9} \square \xrightarrow{-4} \square$

$8 \xrightarrow{+9} \square \xrightarrow{+4} \square \xrightarrow{-7} \square \xrightarrow{+2} \square \xrightarrow{-7} \square \xrightarrow{+3} \square \xrightarrow{+3} \square \xrightarrow{-5} \square$

Continuar las series:

$7 \Rightarrow 12 \Rightarrow 17 \Rightarrow \square \Rightarrow \square \Rightarrow \square \Rightarrow \square \Rightarrow \square$

$73 \Rightarrow 70 \Rightarrow 67 \Rightarrow \square \Rightarrow \square \Rightarrow \square \Rightarrow \square \Rightarrow \square$

Completar:

8	2	1	4	→	ⓧ15
2	3	1	3	→	○
4	8	4	0	→	○
3	2	3	4	→	○

↓ ↓ ↓ ↓

○ ○ ○ ○

4	2	5	□
6		□	7
□		□	
□			

$$\begin{array}{r} 46 \\ - \dots \\ \hline 40 \end{array} \quad + \quad \begin{array}{r} 66 \\ + \dots \\ \hline 75 \end{array}$$

Completar:

$4 + 4 + \underline{\quad} = 17$

$6 + 6 + \underline{\quad} = 12$

$80 + 10 = \square$

$70 - 40 = \square$

$30 + \underline{\quad} = 60$

$14 - 5 = \square$

$86 + \underline{\quad} = 95$

$77 + \underline{\quad} = 83$

Sumar y restar:

$\square + \dots \square + \dots \square - \dots \square + \dots \square - \dots \square + \dots \square - \dots \square + \dots \square$

Colocar y sumar:

43 + 11 + 1

2 + 72 + 13

www.fichas.net

15 + 2 + 52

Nombre: _____

Fecha: _____

Calcular mentalmente

$$\boxed{1} \xrightarrow{+6} \boxed{} \xrightarrow{+3} \boxed{} \xrightarrow{-2} \boxed{} \xrightarrow{+2} \boxed{} \xrightarrow{-2} \boxed{} \xrightarrow{+6} \boxed{} \xrightarrow{+2} \boxed{} \xrightarrow{-3} \boxed{}$$

$$\boxed{1} \xrightarrow{+6} \boxed{} \xrightarrow{+2} \boxed{} \xrightarrow{-7} \boxed{} \xrightarrow{+2} \boxed{} \xrightarrow{-4} \boxed{} \xrightarrow{+3} \boxed{} \xrightarrow{+9} \boxed{} \xrightarrow{-1} \boxed{}$$

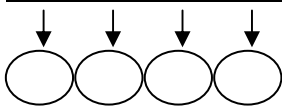
Continuar las series:

$$4 \Rightarrow 6 \Rightarrow 8 \Rightarrow \Rightarrow \Rightarrow \Rightarrow \Rightarrow \Rightarrow$$

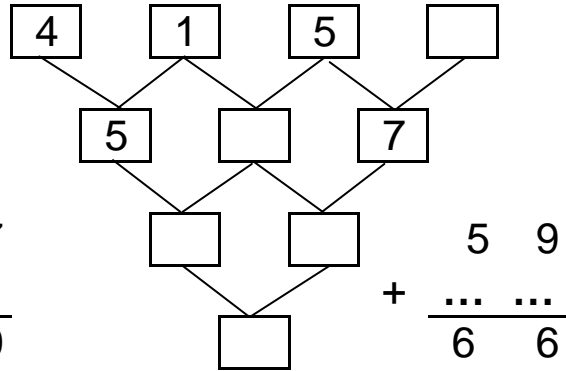
$$49 \Rightarrow 47 \Rightarrow 45 \Rightarrow \Rightarrow \Rightarrow \Rightarrow \Rightarrow \Rightarrow$$

Completar:

3	3	2	3	→	⓪
2	4	0	4	→	⓪
0	8	3	6	→	⓪
0	2	5	3	→	⓪



$$\begin{array}{r} 97 \\ - \dots \\ \hline 90 \end{array}$$



Completar:

$$5 + 5 + \underline{\quad} = 14$$

$$8 + 8 + \underline{\quad} = 24$$

$$30 + 30 = \boxed{}$$

$$30 - 20 = \boxed{}$$

$$40 + \underline{\quad} = 40$$

$$19 - 5 = \boxed{}$$

$$58 + \underline{\quad} = 67$$

$$58 + \underline{\quad} = 64$$

Sumar y restar:

$$\boxed{8} + \dots \boxed{10} + \dots \boxed{14} - \dots \boxed{13} + \dots \boxed{16} - \dots \boxed{13} + \dots \boxed{15} - \dots \boxed{14} + \dots \boxed{17}$$

Colocar y sumar:

53 + 16 + 2

4 + 35 + 11

www.fichas.net

12 + 1 + 57

Nombre: _____

Fecha: _____

Calcular mentalmente

$8 \xrightarrow{+7} \square \xrightarrow{+2} \square \xrightarrow{-1} \square \xrightarrow{+7} \square \xrightarrow{-7} \square \xrightarrow{+6} \square \xrightarrow{+7} \square \xrightarrow{-7} \square$

$5 \xrightarrow{+8} \square \xrightarrow{+7} \square \xrightarrow{-4} \square \xrightarrow{+6} \square \xrightarrow{-1} \square \xrightarrow{+1} \square \xrightarrow{+2} \square \xrightarrow{-0} \square$

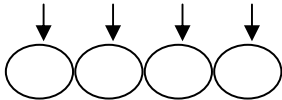
Continuar las series:

$35 \Rightarrow 38 \Rightarrow 41 \Rightarrow \square \Rightarrow \square \Rightarrow \square \Rightarrow \square \Rightarrow \square$

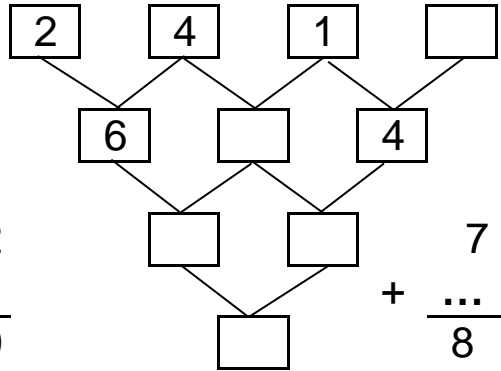
$79 \Rightarrow 74 \Rightarrow 69 \Rightarrow \square \Rightarrow \square \Rightarrow \square \Rightarrow \square \Rightarrow \square$

Completar:

2	3	2	0	→	○7
1	4	2	0	→	○
3	2	4	1	→	○
0	1	3	3	→	○



$$\begin{array}{r} 62 \\ - \dots \\ \hline 60 \end{array}$$



Completar:

$3 + 3 + \square = 11$

$5 + 5 + \square = 15$

$70 + 10 = \square$

$20 - 20 = \square$

$30 + \square = 50$

$19 - 0 = \square$

$87 + \square = 92$

$85 + \square = 92$

Sumar y restar:

$1 + \dots + 4 + \dots + 7 - \dots - 5 + \dots + 6 - \dots - 5 + \dots + 9 - \dots - 7 + \dots + 9$

Colocar y sumar:

$69 + 14 + 5$
□

$1 + 40 + 12$
□

www.fichas.net

$15 + 2 + 74$
□

Nombre: _____

Fecha: _____

Calcular mentalmente

$6 \xrightarrow{+7} \square \xrightarrow{+4} \square \xrightarrow{-3} \square \xrightarrow{+3} \square \xrightarrow{-8} \square \xrightarrow{+4} \square \xrightarrow{+7} \square \xrightarrow{-0} \square$

$1 \xrightarrow{+8} \square \xrightarrow{+7} \square \xrightarrow{-6} \square \xrightarrow{+1} \square \xrightarrow{-1} \square \xrightarrow{+8} \square \xrightarrow{+7} \square \xrightarrow{-1} \square$

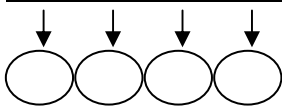
Continuar las series:

$58 \Rightarrow 60 \Rightarrow 62 \Rightarrow \Rightarrow \Rightarrow \Rightarrow \Rightarrow \Rightarrow \Rightarrow$

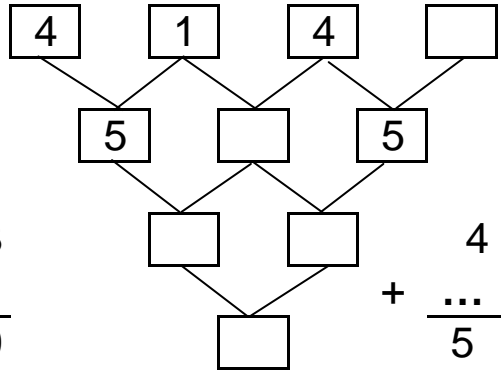
$34 \Rightarrow 31 \Rightarrow 28 \Rightarrow \Rightarrow \Rightarrow \Rightarrow \Rightarrow \Rightarrow \Rightarrow$

Completar:

3	5	2	1	→	11
1	4	2	2	→	○
5	4	2	8	→	○
3	1	4	3	→	○



$$\begin{array}{r} 4 \ 3 \\ - \dots \dots \\ \hline 4 \ 0 \end{array}$$



$$\begin{array}{r} 4 \ 6 \\ + \dots \dots \\ \hline 5 \ 8 \end{array}$$

Completar:

$5 + 5 + \underline{\quad} = 12$

$7 + 7 + \underline{\quad} = 17$

$0 + 60 = \square$

$60 - 20 = \square$

$80 + \underline{\quad} = 90$

$10 - 4 = \square$

$76 + \underline{\quad} = 84$

$72 + \underline{\quad} = 78$

Sumar y restar:

$3 + \dots 7 + \dots 9 - \dots 7 + \dots 7 - \dots 6 + \dots 9 - \dots 8 + \dots 9$

Colocar y sumar:

63 + 15 + 5

1 + 32 + 12

www.fichas.net

12 + 2 + 33

Nombre: _____

Fecha: _____

Calcular mentalmente

$$\boxed{6} \xrightarrow{+0} \boxed{} \xrightarrow{+4} \boxed{} \xrightarrow{-4} \boxed{} \xrightarrow{+6} \boxed{} \xrightarrow{-8} \boxed{} \xrightarrow{+6} \boxed{} \xrightarrow{+6} \boxed{} \xrightarrow{-5} \boxed{}$$

$$\boxed{2} \xrightarrow{+8} \boxed{} \xrightarrow{+7} \boxed{} \xrightarrow{-7} \boxed{} \xrightarrow{+3} \boxed{} \xrightarrow{-9} \boxed{} \xrightarrow{+1} \boxed{} \xrightarrow{+7} \boxed{} \xrightarrow{-8} \boxed{}$$

Continuar las series:

$$40 \Rightarrow 44 \Rightarrow 48 \Rightarrow \quad \Rightarrow \quad \Rightarrow \quad \Rightarrow \quad \Rightarrow \quad \Rightarrow$$

$$31 \Rightarrow 28 \Rightarrow 25 \Rightarrow \quad \Rightarrow \quad \Rightarrow \quad \Rightarrow \quad \Rightarrow \quad \Rightarrow$$

Completar:

4	2	0	2	→	⊙	8
2	1	2	2	→	⊙	
4	7	4	6	→	⊙	
5	2	2	9	→	⊙	

↓ ↓ ↓ ↓

⊙ ⊙ ⊙ ⊙

2	1	3	□
3	□	4	
□	□		
□			

$$- \begin{array}{r} 3 \quad 3 \\ \dots \quad \dots \\ \hline 3 \quad 0 \end{array} \quad + \begin{array}{r} 2 \quad 5 \\ \dots \quad \dots \\ \hline 3 \quad 5 \end{array}$$

Completar:

$$8 + 8 + \underline{\quad} = 25 \qquad 5 + 5 + \underline{\quad} = 10$$

$$20 + 50 = \boxed{} \qquad 10 - 0 = \boxed{} \qquad 10 + \underline{\quad} = 70$$

$$19 - 8 = \boxed{} \qquad 55 + \underline{\quad} = 64 \qquad 63 + \underline{\quad} = 71$$

Sumar y restar:

$$\boxed{3} + \dots \boxed{7} + \dots \boxed{9} - \dots \boxed{9} + \dots \boxed{12} - \dots \boxed{10} + \dots \boxed{14} - \dots \boxed{10} + \dots \boxed{13}$$

Colocar y sumar:

44 + 16 + 3

4 + 70 + 12

www.fichas.net

11 + 1 + 58

Nombre: _____

Fecha: _____

Calcular mentalmente

$$\boxed{2} \xrightarrow{+6} \boxed{} \xrightarrow{+7} \boxed{} \xrightarrow{-4} \boxed{} \xrightarrow{+4} \boxed{} \xrightarrow{-6} \boxed{} \xrightarrow{+8} \boxed{} \xrightarrow{+9} \boxed{} \xrightarrow{-4} \boxed{}$$

$$\boxed{4} \xrightarrow{+8} \boxed{} \xrightarrow{+1} \boxed{} \xrightarrow{-2} \boxed{} \xrightarrow{+9} \boxed{} \xrightarrow{-7} \boxed{} \xrightarrow{+6} \boxed{} \xrightarrow{+7} \boxed{} \xrightarrow{-7} \boxed{}$$

Continuar las series:

$$45 \Rightarrow 49 \Rightarrow 53 \Rightarrow \quad \Rightarrow \quad \Rightarrow \quad \Rightarrow \quad \Rightarrow \quad \Rightarrow$$

$$49 \Rightarrow 48 \Rightarrow 47 \Rightarrow \quad \Rightarrow \quad \Rightarrow \quad \Rightarrow \quad \Rightarrow \quad \Rightarrow$$

Completar:

5	4	1	3
0	2	2	4
5	9	2	5
5	0	3	3

→ (13)
→ ○
→ ○
→ ○

↓ ↓ ↓ ↓
○ ○ ○ ○

0	2	2	□
2	□	4	
□	□		
□			

$$- \begin{array}{r} 7 \ 8 \\ \dots \ \dots \\ 7 \ 0 \end{array} \quad + \begin{array}{r} 3 \ 3 \\ \dots \ \dots \\ 4 \ 1 \end{array}$$

Completar:

$$4 + 4 + \underline{\quad} = 16 \qquad 6 + 6 + \underline{\quad} = 18$$

$$40 + 50 = \boxed{} \qquad 30 - 20 = \boxed{} \qquad 20 + \underline{\quad} = 40$$

$$15 - 4 = \boxed{} \qquad 78 + \underline{\quad} = 85 \qquad 67 + \underline{\quad} = 73$$

Sumar y restar:

$$\boxed{3} + \dots \boxed{5} + \dots \boxed{7} - \dots \boxed{6} + \dots \boxed{8} - \dots \boxed{8} + \dots \boxed{10} - \dots \boxed{7} + \dots \boxed{9}$$

Colocar y sumar:

57 + 11 + 1

6 + 30 + 13

www.fichas.net

17 + 0 + 70

Nombre: _____

Fecha: _____

Calcular mentalmente

$$\boxed{2} \xrightarrow{+9} \boxed{} \xrightarrow{+0} \boxed{} \xrightarrow{-8} \boxed{} \xrightarrow{+7} \boxed{} \xrightarrow{-6} \boxed{} \xrightarrow{+8} \boxed{} \xrightarrow{+4} \boxed{} \xrightarrow{-6} \boxed{}$$

$$\boxed{7} \xrightarrow{+8} \boxed{} \xrightarrow{+8} \boxed{} \xrightarrow{-9} \boxed{} \xrightarrow{+7} \boxed{} \xrightarrow{-9} \boxed{} \xrightarrow{+0} \boxed{} \xrightarrow{+1} \boxed{} \xrightarrow{-1} \boxed{}$$

Continuar las series:

$$4 \Rightarrow 7 \Rightarrow 10 \Rightarrow \quad \Rightarrow \quad \Rightarrow \quad \Rightarrow \quad \Rightarrow \quad \Rightarrow$$

$$48 \Rightarrow 43 \Rightarrow 38 \Rightarrow \quad \Rightarrow \quad \Rightarrow \quad \Rightarrow \quad \Rightarrow \quad \Rightarrow$$

Completar:

8	3	1	4	→	ⓧ16
2	2	1	1	→	○
4	4	3	1	→	○
2	1	5	4	→	○

↓ ↓ ↓ ↓

○ ○ ○ ○

4	1	1	□
5		□	6
□	□		
□			

$$\begin{array}{r} 20 \\ - \dots \\ \hline 20 \end{array} \quad + \begin{array}{r} 52 \\ + \dots \\ \hline 61 \end{array}$$

Completar:

$$3 + 3 + \underline{\quad} = 10 \qquad 1 + 1 + \underline{\quad} = 4$$

$$80 + 10 = \boxed{} \qquad 60 - 60 = \boxed{} \qquad 70 + \underline{\quad} = 80$$

$$15 - 5 = \boxed{} \qquad 57 + \underline{\quad} = 62 \qquad 77 + \underline{\quad} = 85$$

Sumar y restar:

$$\boxed{9} + \dots \boxed{11} + \dots \boxed{12} - \dots \boxed{8} + \dots \boxed{13} - \dots \boxed{12} + \dots \boxed{12} - \dots \boxed{8} + \dots \boxed{12}$$

Colocar y sumar:

23 + 14 + 0

4 + 30 + 13

www.fichas.net

10 + 3 + 46

Nombre: _____

Fecha: _____

Calcular mentalmente

$6 \xrightarrow{+4} \square \xrightarrow{+2} \square \xrightarrow{-8} \square \xrightarrow{+9} \square \xrightarrow{-5} \square \xrightarrow{+8} \square \xrightarrow{+4} \square \xrightarrow{-3} \square$

$5 \xrightarrow{+8} \square \xrightarrow{+7} \square \xrightarrow{-8} \square \xrightarrow{+4} \square \xrightarrow{-7} \square \xrightarrow{+6} \square \xrightarrow{+6} \square \xrightarrow{-8} \square$

Continuar las series:

$53 \Rightarrow 56 \Rightarrow 59 \Rightarrow \square \Rightarrow \square \Rightarrow \square \Rightarrow \square \Rightarrow \square$

$92 \Rightarrow 89 \Rightarrow 86 \Rightarrow \square \Rightarrow \square \Rightarrow \square \Rightarrow \square \Rightarrow \square$

Completar:

2	0	3	3	→	8
1	0	2	5	→	○
0	2	2	6	→	○
4	2	0	4	→	○

↓ ↓ ↓ ↓

○ ○ ○ ○

4	3	5	□
7		□	8
□		□	
□			

$$- \begin{array}{r} 32 \\ \dots \\ 30 \end{array} + \begin{array}{r} 48 \\ \dots \\ 51 \end{array}$$

Completar:

$3 + 3 + \square = 11$

$5 + 5 + \square = 12$

$80 + 0 = \square$

$90 - 50 = \square$

$80 + \square = 90$

$19 - 7 = \square$

$71 + \square = 77$

$83 + \square = 91$

Sumar y restar:

$7 + \dots 7 + \dots 11 - \dots 9 + \dots 13 - \dots 9 + \dots 12 - \dots 9 + \dots 14$

Colocar y sumar:

$66 + 15 + 2$

--

$2 + 73 + 11$

--

www.fichas.net

$11 + 2 + 62$

--

Nombre: _____

Fecha: _____

Calcular mentalmente

$7 \xrightarrow{+6} \square \xrightarrow{+5} \square \xrightarrow{-5} \square \xrightarrow{+5} \square \xrightarrow{-2} \square \xrightarrow{+1} \square \xrightarrow{+6} \square \xrightarrow{-6} \square$

$8 \xrightarrow{+7} \square \xrightarrow{+9} \square \xrightarrow{-9} \square \xrightarrow{+2} \square \xrightarrow{-7} \square \xrightarrow{+7} \square \xrightarrow{+9} \square \xrightarrow{-5} \square$

Continuar las series:

$20 \Rightarrow 22 \Rightarrow 24 \Rightarrow \square \Rightarrow \square \Rightarrow \square \Rightarrow \square \Rightarrow \square$

$74 \Rightarrow 70 \Rightarrow 66 \Rightarrow \square \Rightarrow \square \Rightarrow \square \Rightarrow \square \Rightarrow \square$

Completar:

4	0	1	1	→	6
1	1	0	5	→	○
4	3	4	5	→	○
3	1	1	6	→	○

↓ ↓ ↓ ↓

○ ○ ○ ○

5	1	3	□
6	□	3	
□	□		
□			

$2 \ 4$
 $- \dots \ \dots$
 $2 \ 0$

$1 \ 1$
 $+ \dots \ \dots$
 $2 \ 8$

Completar:

$9 + 9 + \underline{\quad} = 19$ $9 + 9 + \underline{\quad} = 19$

$20 + 10 = \square$ $20 - 0 = \square$ $70 + \underline{\quad} = 70$

$13 - 6 = \square$ $68 + \underline{\quad} = 74$ $60 + \underline{\quad} = 65$

Sumar y restar:

$2 + \dots + 5 + \dots + 6 - \dots - 2 + \dots + 7 - \dots - 4 + \dots + 5 - \dots - 0 + \dots + 0$

Colocar y sumar:

64 + 11 + 4

2 + 29 + 13

www.fichas.net

17 + 0 + 39

Nombre: _____

Fecha: _____

Calcular mentalmente

$\boxed{4} \xrightarrow{+3} \boxed{} \xrightarrow{+5} \boxed{} \xrightarrow{-5} \boxed{} \xrightarrow{+6} \boxed{} \xrightarrow{-7} \boxed{} \xrightarrow{+6} \boxed{} \xrightarrow{+0} \boxed{} \xrightarrow{-2} \boxed{}$

$\boxed{7} \xrightarrow{+6} \boxed{} \xrightarrow{+7} \boxed{} \xrightarrow{-1} \boxed{} \xrightarrow{+9} \boxed{} \xrightarrow{-6} \boxed{} \xrightarrow{+7} \boxed{} \xrightarrow{+3} \boxed{} \xrightarrow{-9} \boxed{}$

Continuar las series:

$34 \Rightarrow 37 \Rightarrow 40 \Rightarrow \Rightarrow \Rightarrow \Rightarrow \Rightarrow $

$50 \Rightarrow 45 \Rightarrow 40 \Rightarrow \Rightarrow \Rightarrow \Rightarrow \Rightarrow $

Completar:

3	3	2	4	→	⊙12
2	5	2	4	→	⊙
1	0	5	4	→	⊙
5	3	3	6	→	⊙

↓ ↓ ↓ ↓

⊙ ⊙ ⊙ ⊙

5	4	1	⊙
9		⊙	4
⊙		⊙	
⊙			

$$- \begin{array}{r} 44 \\ \dots \dots \\ 40 \end{array} + \begin{array}{r} 29 \\ \dots \dots \\ 38 \end{array}$$

Completar:

$4 + 4 + \underline{} = 11$ $1 + 1 + \underline{} = 2$

$10 + 30 = \boxed{}$ $90 - 20 = \boxed{}$ $50 + \underline{} = 80$

$16 - 0 = \boxed{}$ $68 + \underline{} = 74$ $63 + \underline{} = 71$

Sumar y restar:

$\boxed{4} + \dots \boxed{7} + \dots \boxed{9} - \dots \boxed{7} + \dots \boxed{11} - \dots \boxed{9} + \dots \boxed{12} - \dots \boxed{12} + \dots \boxed{14}$

Colocar y sumar:

56 + 12 + 0

1 + 41 + 11

www.fichas.net

11 + 3 + 27

Nombre: _____

Fecha: _____

Calcular mentalmente

$\boxed{1} \xrightarrow{+5} \boxed{} \xrightarrow{+0} \boxed{} \xrightarrow{-0} \boxed{} \xrightarrow{+9} \boxed{} \xrightarrow{-2} \boxed{} \xrightarrow{+2} \boxed{} \xrightarrow{+3} \boxed{} \xrightarrow{-5} \boxed{}$

$\boxed{1} \xrightarrow{+4} \boxed{} \xrightarrow{+9} \boxed{} \xrightarrow{-4} \boxed{} \xrightarrow{+8} \boxed{} \xrightarrow{-3} \boxed{} \xrightarrow{+5} \boxed{} \xrightarrow{+1} \boxed{} \xrightarrow{-6} \boxed{}$

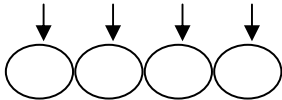
Continuar las series:

$1 \Rightarrow 4 \Rightarrow 7 \Rightarrow \Rightarrow \Rightarrow \Rightarrow \Rightarrow $

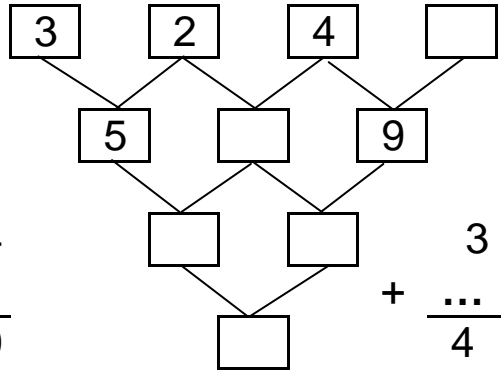
$48 \Rightarrow 45 \Rightarrow 42 \Rightarrow \Rightarrow \Rightarrow \Rightarrow \Rightarrow $

Completar:

1	0	1	5	→	⊙7
1	0	2	4	→	⊙
4	5	3	4	→	⊙
1	0	3	5	→	⊙



$$\begin{array}{r} 24 \\ - \dots \\ \hline 20 \end{array}$$



$$\begin{array}{r} 37 \\ + \dots \\ \hline 46 \end{array}$$

Completar:

$2 + 2 + \underline{} = 12$

$2 + 2 + \underline{} = 5$

$60 + 10 = \boxed{}$

$20 - 0 = \boxed{}$

$30 + \underline{} = 60$

$13 - 3 = \boxed{}$

$75 + \underline{} = 84$

$52 + \underline{} = 59$

Sumar y restar:

$\boxed{9} + \dots \boxed{13} + \dots \boxed{15} - \dots \boxed{14} + \dots \boxed{16} - \dots \boxed{13} + \dots \boxed{16} - \dots \boxed{13} + \dots \boxed{16}$

Colocar y sumar:

$33 + 15 + 5$

$4 + 65 + 11$

www.fichas.net

$16 + 2 + 69$

Nombre: _____

Fecha: _____

Calcular mentalmente

$$\boxed{8} \xrightarrow{+1} \boxed{} \xrightarrow{+2} \boxed{} \xrightarrow{-0} \boxed{} \xrightarrow{+2} \boxed{} \xrightarrow{-5} \boxed{} \xrightarrow{+6} \boxed{} \xrightarrow{+8} \boxed{} \xrightarrow{-8} \boxed{}$$

$$\boxed{4} \xrightarrow{+0} \boxed{} \xrightarrow{+2} \boxed{} \xrightarrow{-6} \boxed{} \xrightarrow{+3} \boxed{} \xrightarrow{-2} \boxed{} \xrightarrow{+5} \boxed{} \xrightarrow{+7} \boxed{} \xrightarrow{-2} \boxed{}$$

Continuar las series:

$$38 \Rightarrow 40 \Rightarrow 42 \Rightarrow \quad \Rightarrow \quad \Rightarrow \quad \Rightarrow \quad \Rightarrow \quad \Rightarrow$$

$$60 \Rightarrow 56 \Rightarrow 52 \Rightarrow \quad \Rightarrow \quad \Rightarrow \quad \Rightarrow \quad \Rightarrow \quad \Rightarrow$$

Completar:

6	4	3	0	→	ⓧ13
1	4	1	1	→	○
2	1	1	1	→	○
1	2	4	2	→	○

↓ ↓ ↓ ↓

○ ○ ○ ○

3	3	2	□
6		□	5
□	□		
□			

$$- \begin{array}{r} 96 \\ \dots \dots \\ 90 \end{array} + \begin{array}{r} 35 \\ \dots \dots \\ 43 \end{array}$$

Completar:

$$9 + 9 + \underline{\quad} = 21 \qquad 3 + 3 + \underline{\quad} = 8$$

$$70 + 10 = \boxed{} \qquad 30 - 0 = \boxed{} \qquad 30 + \underline{\quad} = 70$$

$$16 - 0 = \boxed{} \qquad 90 + \underline{\quad} = 98 \qquad 53 + \underline{\quad} = 59$$

Sumar y restar:

$$\boxed{4} + \dots \boxed{8} + \dots \boxed{10} - \dots \boxed{6} + \dots \boxed{10} - \dots \boxed{5} + \dots \boxed{5} - \dots \boxed{4} + \dots \boxed{8}$$

Colocar y sumar:

45 + 11 + 3

5 + 65 + 11

www.fichas.net

15 + 1 + 65

Nombre: _____

Fecha: _____

Calcular mentalmente

$$\boxed{4} \xrightarrow{+8} \boxed{} \xrightarrow{+2} \boxed{} \xrightarrow{-1} \boxed{} \xrightarrow{+1} \boxed{} \xrightarrow{-4} \boxed{} \xrightarrow{+4} \boxed{} \xrightarrow{+3} \boxed{} \xrightarrow{-7} \boxed{}$$

$$\boxed{7} \xrightarrow{+4} \boxed{} \xrightarrow{+2} \boxed{} \xrightarrow{-9} \boxed{} \xrightarrow{+9} \boxed{} \xrightarrow{-3} \boxed{} \xrightarrow{+1} \boxed{} \xrightarrow{+7} \boxed{} \xrightarrow{-3} \boxed{}$$

Continuar las series:

$$38 \Rightarrow 42 \Rightarrow 46 \Rightarrow \quad \Rightarrow \quad \Rightarrow \quad \Rightarrow \quad \Rightarrow \quad \Rightarrow$$

$$89 \Rightarrow 86 \Rightarrow 83 \Rightarrow \quad \Rightarrow \quad \Rightarrow \quad \Rightarrow \quad \Rightarrow \quad \Rightarrow$$

Completar:

6	3	1	2	→	⊙12
0	2	2	3	→	⊙
3	4	2	4	→	⊙
0	0	4	8	→	⊙

↓ ↓ ↓ ↓

⊙ ⊙ ⊙ ⊙

3	4	3	⊙
7	⊙	7	
⊙	⊙		
⊙			

$$- \begin{array}{r} 3 \ 1 \\ \dots \ \dots \\ 3 \ 0 \end{array} \quad + \begin{array}{r} 3 \ 3 \\ \dots \ \dots \\ 4 \ 0 \end{array}$$

Completar:

$$5 + 5 + \underline{\quad} = 19$$

$$8 + 8 + \underline{\quad} = 17$$

$$60 + 20 = \boxed{}$$

$$10 - 0 = \boxed{}$$

$$60 + \underline{\quad} = 80$$

$$15 - 1 = \boxed{}$$

$$62 + \underline{\quad} = 69$$

$$72 + \underline{\quad} = 77$$

Sumar y restar:

$$\boxed{2} + \dots \boxed{4} + \dots \boxed{6} - \dots \boxed{4} + \dots \boxed{5} - \dots \boxed{4} + \dots \boxed{5} - \dots \boxed{1} + \dots \boxed{1}$$

Colocar y sumar:

54 + 16 + 9

4 + 69 + 11

www.fichas.net

18 + 2 + 65

Nombre: _____

Fecha: _____

Calcular mentalmente

$$\boxed{3} \xrightarrow{+5} \boxed{} \xrightarrow{+7} \boxed{} \xrightarrow{-4} \boxed{} \xrightarrow{+6} \boxed{} \xrightarrow{-5} \boxed{} \xrightarrow{+0} \boxed{} \xrightarrow{+3} \boxed{} \xrightarrow{-4} \boxed{}$$

$$\boxed{6} \xrightarrow{+9} \boxed{} \xrightarrow{+6} \boxed{} \xrightarrow{-6} \boxed{} \xrightarrow{+3} \boxed{} \xrightarrow{-0} \boxed{} \xrightarrow{+9} \boxed{} \xrightarrow{+8} \boxed{} \xrightarrow{-7} \boxed{}$$

Continuar las series:

$$47 \Rightarrow 48 \Rightarrow 49 \Rightarrow \Rightarrow \Rightarrow \Rightarrow \Rightarrow \Rightarrow \Rightarrow$$

$$84 \Rightarrow 82 \Rightarrow 80 \Rightarrow \Rightarrow \Rightarrow \Rightarrow \Rightarrow \Rightarrow \Rightarrow$$

Completar:

1	2	1	3
0	4	1	4
4	8	4	7
1	2	4	8

→ (7)
→ ○
→ ○
→ ○

↓ ↓ ↓ ↓
○ ○ ○ ○

1	3	3	□
4	□	4	
□	□		
□			

$$\begin{array}{r} 16 \\ - \dots \\ \hline 10 \end{array} \quad + \quad \begin{array}{r} 33 \\ + \dots \\ \hline 48 \end{array}$$

Completar:

$$4 + 4 + \underline{\quad} = 9 \qquad 5 + 5 + \underline{\quad} = 18$$

$$10 + 20 = \boxed{} \qquad 40 - 30 = \boxed{} \qquad 50 + \underline{\quad} = 80$$

$$12 - 6 = \boxed{} \qquad 80 + \underline{\quad} = 89 \qquad 57 + \underline{\quad} = 64$$

Sumar y restar:

$$\boxed{4} + \dots \boxed{7} + \dots \boxed{8} - \dots \boxed{7} + \dots \boxed{11} - \dots \boxed{7} + \dots \boxed{9} - \dots \boxed{6} + \dots \boxed{8}$$

Colocar y sumar:

41 + 15 + 1

0 + 37 + 12

www.fichas.net

15 + 1 + 65

Nombre: _____

Fecha: _____

Calcular mentalmente

$$\boxed{2} \xrightarrow{+7} \boxed{} \xrightarrow{+2} \boxed{} \xrightarrow{-4} \boxed{} \xrightarrow{+5} \boxed{} \xrightarrow{-8} \boxed{} \xrightarrow{+1} \boxed{} \xrightarrow{+9} \boxed{} \xrightarrow{-5} \boxed{}$$

$$\boxed{8} \xrightarrow{+6} \boxed{} \xrightarrow{+7} \boxed{} \xrightarrow{-3} \boxed{} \xrightarrow{+4} \boxed{} \xrightarrow{-5} \boxed{} \xrightarrow{+4} \boxed{} \xrightarrow{+0} \boxed{} \xrightarrow{-6} \boxed{}$$

Continuar las series:

$$0 \Rightarrow 3 \Rightarrow 6 \Rightarrow \quad \Rightarrow \quad \Rightarrow \quad \Rightarrow \quad \Rightarrow \quad \Rightarrow$$

$$89 \Rightarrow 85 \Rightarrow 81 \Rightarrow \quad \Rightarrow \quad \Rightarrow \quad \Rightarrow \quad \Rightarrow \quad \Rightarrow$$

Completar:

1	3	3	5	→	⓫
0	0	2	3	→	○
2	2	2	6	→	○
2	1	4	8	→	○

↓ ↓ ↓ ↓

○ ○ ○ ○

1	4	4	□
5		□	8
□		□	
□			

$$- \begin{array}{r} 26 \\ \dots \\ 20 \end{array} + \begin{array}{r} 38 \\ \dots \\ 44 \end{array}$$

Completar:

$$1 + 1 + \underline{\quad} = 6 \qquad 1 + 1 + \underline{\quad} = 6$$

$$10 + 50 = \boxed{} \qquad 40 - 0 = \boxed{} \qquad 10 + \underline{\quad} = 40$$

$$14 - 2 = \boxed{} \qquad 63 + \underline{\quad} = 71 \qquad 56 + \underline{\quad} = 63$$

Sumar y restar:

$$\boxed{1} + \dots \boxed{3} + \dots \boxed{8} - \dots \boxed{6} + \dots \boxed{7} - \dots \boxed{4} + \dots \boxed{9} - \dots \boxed{8} + \dots \boxed{12}$$

Colocar y sumar:

68 + 16 + 3

4 + 31 + 10

www.fichas.net

14 + 0 + 47

Nombre: _____

Fecha: _____

Calcular mentalmente

$$\boxed{3} \xrightarrow{+4} \boxed{} \xrightarrow{+6} \boxed{} \xrightarrow{-9} \boxed{} \xrightarrow{+4} \boxed{} \xrightarrow{-4} \boxed{} \xrightarrow{+4} \boxed{} \xrightarrow{+5} \boxed{} \xrightarrow{-2} \boxed{}$$

$$\boxed{2} \xrightarrow{+1} \boxed{} \xrightarrow{+9} \boxed{} \xrightarrow{-4} \boxed{} \xrightarrow{+0} \boxed{} \xrightarrow{-2} \boxed{} \xrightarrow{+8} \boxed{} \xrightarrow{+6} \boxed{} \xrightarrow{-3} \boxed{}$$

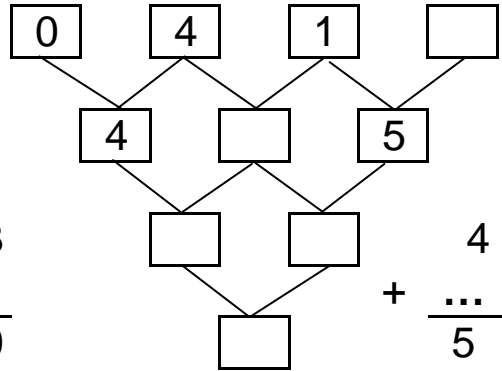
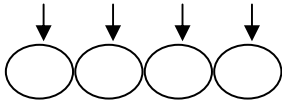
Continuar las series:

$$7 \Rightarrow 10 \Rightarrow 13 \Rightarrow \Rightarrow \Rightarrow \Rightarrow \Rightarrow \Rightarrow \Rightarrow$$

$$33 \Rightarrow 29 \Rightarrow 25 \Rightarrow \Rightarrow \Rightarrow \Rightarrow \Rightarrow \Rightarrow \Rightarrow$$

Completar:

2	3	2	4	→	⓪
1	1	1	2	→	⓪
0	2	2	6	→	⓪
0	3	1	5	→	⓪



$$\begin{array}{r} 53 \\ - \dots \\ \hline 50 \end{array}$$

$$\begin{array}{r} 48 \\ + \dots \\ \hline 55 \end{array}$$

Completar:

$$2 + 2 + \underline{\quad} = 9$$

$$2 + 2 + \underline{\quad} = 5$$

$$0 + 60 = \boxed{}$$

$$70 - 0 = \boxed{}$$

$$80 + \underline{\quad} = 80$$

$$10 - 6 = \boxed{}$$

$$87 + \underline{\quad} = 94$$

$$72 + \underline{\quad} = 78$$

Sumar y restar:

$$\boxed{6} + \dots \boxed{11} + \dots \boxed{13} - \dots \boxed{13} + \dots \boxed{16} - \dots \boxed{15} + \dots \boxed{20} - \dots \boxed{17} + \dots \boxed{20}$$

Colocar y sumar:

65 + 16 + 8

2 + 76 + 12

www.fichas.net

16 + 3 + 75

Nombre: _____

Fecha: _____

Calcular mentalmente

$3 \xrightarrow{+9} \square \xrightarrow{+6} \square \xrightarrow{-4} \square \xrightarrow{+2} \square \xrightarrow{-8} \square \xrightarrow{+1} \square \xrightarrow{+6} \square \xrightarrow{-7} \square$

$5 \xrightarrow{+6} \square \xrightarrow{+3} \square \xrightarrow{-5} \square \xrightarrow{+2} \square \xrightarrow{-9} \square \xrightarrow{+4} \square \xrightarrow{+5} \square \xrightarrow{-7} \square$

Continuar las series:

$14 \Rightarrow 17 \Rightarrow 20 \Rightarrow \square \Rightarrow \square \Rightarrow \square \Rightarrow \square \Rightarrow \square$

$79 \Rightarrow 75 \Rightarrow 71 \Rightarrow \square \Rightarrow \square \Rightarrow \square \Rightarrow \square \Rightarrow \square$

Completar:

2	3	0	1	→	6
2	2	0	2	→	○
1	9	5	1	→	○
3	1	0	8	→	○

↓ ↓ ↓ ↓

○ ○ ○ ○

0	4	2	□
4	□	5	
□	□		
□			

$$\begin{array}{r} 25 \\ - \dots \\ \hline 20 \end{array}$$

$$\begin{array}{r} 31 \\ + \dots \\ \hline 46 \end{array}$$

Completar:

$4 + 4 + \underline{\quad} = 14$ $0 + 0 + \underline{\quad} = 2$

$80 + 0 = \square$ $80 - 50 = \square$ $70 + \underline{\quad} = 90$

$14 - 6 = \square$ $83 + \underline{\quad} = 92$ $78 + \underline{\quad} = 86$

Sumar y restar:

$9 + \dots$ $13 + \dots$ $14 - \dots$ $11 + \dots$ $13 - \dots$ $12 + \dots$ $16 - \dots$ $12 + \dots$ 17

Colocar y sumar:

25 + 13 + 0

0 + 62 + 10

www.fichas.net

13 + 2 + 48

Nombre: _____

Fecha: _____

Calcular mentalmente

$5 \xrightarrow{+8} \square \xrightarrow{+7} \square \xrightarrow{-8} \square \xrightarrow{+5} \square \xrightarrow{-8} \square \xrightarrow{+4} \square \xrightarrow{+5} \square \xrightarrow{-3} \square$

$6 \xrightarrow{+6} \square \xrightarrow{+4} \square \xrightarrow{-0} \square \xrightarrow{+8} \square \xrightarrow{-6} \square \xrightarrow{+9} \square \xrightarrow{+7} \square \xrightarrow{-9} \square$

Continuar las series:

$22 \Rightarrow 25 \Rightarrow 28 \Rightarrow \square \Rightarrow \square \Rightarrow \square \Rightarrow \square \Rightarrow \square$

$92 \Rightarrow 90 \Rightarrow 88 \Rightarrow \square \Rightarrow \square \Rightarrow \square \Rightarrow \square \Rightarrow \square$

Completar:

1	2	1	5	→	9
3	0	0	0	→	○
4	5	4	9	→	○
5	0	2	1	→	○

↓ ↓ ↓ ↓

○ ○ ○ ○

0	2	0	□
2	□	3	
□	□		
□			

$8 \ 6$
 $- \dots \ \dots$
 $8 \ 0$

$2 \ 1$
 $+ \dots \ \dots$
 $3 \ 2$

Completar:

$4 + 4 + \underline{\quad} = 15$ $0 + 0 + \underline{\quad} = 0$

$60 + 10 = \square$ $50 - 40 = \square$ $20 + \underline{\quad} = 80$

$10 - 7 = \square$ $61 + \underline{\quad} = 66$ $71 + \underline{\quad} = 77$

Sumar y restar:

$5 + \dots$ $5 + \dots$ $6 - \dots$ $5 + \dots$ $7 - \dots$ $2 + \dots$ $5 - \dots$ $2 + \dots$ 6

Colocar y sumar:

68 + 13 + 1

6 + 57 + 12

www.fichas.net

19 + 2 + 36

Nombre: _____

Fecha: _____

Calcular mentalmente

$3 \xrightarrow{+8} \square \xrightarrow{+3} \square \xrightarrow{-5} \square \xrightarrow{+1} \square \xrightarrow{-2} \square \xrightarrow{+4} \square \xrightarrow{+3} \square \xrightarrow{-6} \square$

$5 \xrightarrow{+9} \square \xrightarrow{+5} \square \xrightarrow{-4} \square \xrightarrow{+7} \square \xrightarrow{-4} \square \xrightarrow{+7} \square \xrightarrow{+7} \square \xrightarrow{-1} \square$

Continuar las series:

$51 \Rightarrow 56 \Rightarrow 61 \Rightarrow \square \Rightarrow \square \Rightarrow \square \Rightarrow \square \Rightarrow \square$

$45 \Rightarrow 41 \Rightarrow 37 \Rightarrow \square \Rightarrow \square \Rightarrow \square \Rightarrow \square \Rightarrow \square$

Completar:

7	1	3	3	→	14
3	2	2	4	→	○
2	3	2	6	→	○
4	1	4	7	→	○

↓ ↓ ↓ ↓

○ ○ ○ ○

2	1	4	□
3		□	7
□	□		
□			

$$- \begin{array}{r} 23 \\ \dots \dots \\ 20 \end{array} + \begin{array}{r} 62 \\ \dots \dots \\ 76 \end{array}$$

Completar:

$4 + 4 + \underline{\quad} = 12$ $7 + 7 + \underline{\quad} = 17$

$50 + 40 = \square$ $10 - 0 = \square$ $20 + \underline{\quad} = 40$

$15 - 8 = \square$ $67 + \underline{\quad} = 72$ $59 + \underline{\quad} = 66$

Sumar y restar:

$3 + \dots 5 + \dots 9 - \dots 6 + \dots 6 - \dots 5 + \dots 9 - \dots 7 + \dots 8$

Colocar y sumar:

31 + 13 + 3

4 + 43 + 12

www.fichas.net

16 + 1 + 48

Nombre: _____

Fecha: _____

Calcular mentalmente

$$\boxed{9} \xrightarrow{+2} \boxed{} \xrightarrow{+0} \boxed{} \xrightarrow{-0} \boxed{} \xrightarrow{+7} \boxed{} \xrightarrow{-7} \boxed{} \xrightarrow{+4} \boxed{} \xrightarrow{+5} \boxed{} \xrightarrow{-2} \boxed{}$$

$$\boxed{8} \xrightarrow{+3} \boxed{} \xrightarrow{+1} \boxed{} \xrightarrow{-7} \boxed{} \xrightarrow{+3} \boxed{} \xrightarrow{-5} \boxed{} \xrightarrow{+8} \boxed{} \xrightarrow{+4} \boxed{} \xrightarrow{-0} \boxed{}$$

Continuar las series:

$$54 \Rightarrow 58 \Rightarrow 62 \Rightarrow \quad \Rightarrow \quad \Rightarrow \quad \Rightarrow \quad \Rightarrow \quad \Rightarrow$$

$$55 \Rightarrow 53 \Rightarrow 51 \Rightarrow \quad \Rightarrow \quad \Rightarrow \quad \Rightarrow \quad \Rightarrow \quad \Rightarrow$$

Completar:

9	1	3	1	→	⊙14
2	1	0	4	→	⊙
1	9	2	1	→	⊙
1	2	2	4	→	⊙

↓ ↓ ↓ ↓

⊙ ⊙ ⊙ ⊙

1	4	1	⊙
5		⊙	3
⊙		⊙	
⊙			

$$\begin{array}{r} 61 \\ - \dots \\ \hline 60 \end{array} \quad + \quad \begin{array}{r} 43 \\ + \dots \\ \hline 53 \end{array}$$

Completar:

$$2 + 2 + \underline{\quad} = 5 \qquad 9 + 9 + \underline{\quad} = 23$$

$$70 + 0 = \boxed{} \qquad 80 - 70 = \boxed{} \qquad 40 + \underline{\quad} = 60$$

$$12 - 6 = \boxed{} \qquad 52 + \underline{\quad} = 60 \qquad 63 + \underline{\quad} = 68$$

Sumar y restar:

$$\boxed{0} + \dots \boxed{4} + \dots \boxed{6} - \dots \boxed{4} + \dots \boxed{8} - \dots \boxed{7} + \dots \boxed{10} - \dots \boxed{9} + \dots \boxed{10}$$

Colocar y sumar:

41 + 13 + 3

0 + 49 + 12

www.fichas.net

12 + 2 + 34

Nombre: _____

Fecha: _____

Calcular mentalmente

$$\boxed{7} \xrightarrow{+8} \boxed{} \xrightarrow{+4} \boxed{} \xrightarrow{-5} \boxed{} \xrightarrow{+2} \boxed{} \xrightarrow{-5} \boxed{} \xrightarrow{+6} \boxed{} \xrightarrow{+9} \boxed{} \xrightarrow{-3} \boxed{}$$

$$\boxed{7} \xrightarrow{+1} \boxed{} \xrightarrow{+0} \boxed{} \xrightarrow{-6} \boxed{} \xrightarrow{+4} \boxed{} \xrightarrow{-4} \boxed{} \xrightarrow{+2} \boxed{} \xrightarrow{+8} \boxed{} \xrightarrow{-2} \boxed{}$$

Continuar las series:

$$26 \Rightarrow 28 \Rightarrow 30 \Rightarrow \quad \Rightarrow \quad \Rightarrow \quad \Rightarrow \quad \Rightarrow \quad \Rightarrow$$

$$38 \Rightarrow 34 \Rightarrow 30 \Rightarrow \quad \Rightarrow \quad \Rightarrow \quad \Rightarrow \quad \Rightarrow \quad \Rightarrow$$

Completar:

5	5	2	1	→	ⓧ13
0	2	1	2	→	○
3	0	5	4	→	○
3	0	1	5	→	○

↓ ↓ ↓ ↓

○ ○ ○ ○

1	1	1	□
	2	□	5
	□	□	
		□	

$$- \begin{array}{r} 25 \\ \dots \dots \\ 20 \end{array} + \begin{array}{r} 63 \\ \dots \dots \\ 78 \end{array}$$

Completar:

$$5 + 5 + \underline{\quad} = 19 \qquad 8 + 8 + \underline{\quad} = 24$$

$$50 + 40 = \boxed{} \qquad 80 - 20 = \boxed{} \qquad 20 + \underline{\quad} = 20$$

$$15 - 3 = \boxed{} \qquad 85 + \underline{\quad} = 93 \qquad 54 + \underline{\quad} = 60$$

Sumar y restar:

$$\boxed{4} + \dots \boxed{9} + \dots \boxed{10} - \dots \boxed{8} + \dots \boxed{11} - \dots \boxed{11} + \dots \boxed{15} - \dots \boxed{10} + \dots \boxed{14}$$

Colocar y sumar:

62 + 12 + 3

2 + 37 + 12

www.fichas.net

16 + 1 + 34

Nombre: _____

Fecha: _____

Calcular mentalmente

$$\boxed{4} \xrightarrow{+1} \boxed{} \xrightarrow{+6} \boxed{} \xrightarrow{-2} \boxed{} \xrightarrow{+5} \boxed{} \xrightarrow{-8} \boxed{} \xrightarrow{+2} \boxed{} \xrightarrow{+5} \boxed{} \xrightarrow{-2} \boxed{}$$

$$\boxed{7} \xrightarrow{+5} \boxed{} \xrightarrow{+8} \boxed{} \xrightarrow{-3} \boxed{} \xrightarrow{+5} \boxed{} \xrightarrow{-4} \boxed{} \xrightarrow{+7} \boxed{} \xrightarrow{+6} \boxed{} \xrightarrow{-2} \boxed{}$$

Continuar las series:

$$36 \Rightarrow 40 \Rightarrow 44 \Rightarrow \quad \Rightarrow \quad \Rightarrow \quad \Rightarrow \quad \Rightarrow \quad \Rightarrow$$

$$54 \Rightarrow 53 \Rightarrow 52 \Rightarrow \quad \Rightarrow \quad \Rightarrow \quad \Rightarrow \quad \Rightarrow \quad \Rightarrow$$

Completar:

0	4	0	2	→	⊙ 6
3	0	2	5	→	⊙
4	7	0	4	→	⊙
1	2	4	6	→	⊙

↓ ↓ ↓ ↓

⊙ ⊙ ⊙ ⊙

2	1	1	⊙
3	⊙	5	
⊙	⊙		
⊙			

$$- \begin{array}{r} 38 \\ \dots \dots \\ 30 \end{array} + \begin{array}{r} 45 \\ \dots \dots \\ 55 \end{array}$$

Completar:

$$3 + 3 + \underline{\quad} = 9 \qquad 4 + 4 + \underline{\quad} = 14$$

$$20 + 40 = \boxed{} \qquad 10 - 0 = \boxed{} \qquad 50 + \underline{\quad} = 60$$

$$16 - 7 = \boxed{} \qquad 57 + \underline{\quad} = 62 \qquad 69 + \underline{\quad} = 75$$

Sumar y restar:

$$\boxed{6} + \dots \boxed{9} + \dots \boxed{13} - \dots \boxed{10} + \dots \boxed{12} - \dots \boxed{9} + \dots \boxed{9} - \dots \boxed{8} + \dots \boxed{11}$$

Colocar y sumar:

64 + 15 + 2

1 + 78 + 12

www.fichas.net

14 + 2 + 41